

Virginia Studies

digital TEI review questions

Student Name:

Directions: Drag the answers to the correct boxes.

Match two characteristics to each region of Virginia.

Valley and Ridge	Blue Ridge Mountains

Drag the following characteristics to complete the chart

Borders the
Appalachian Plateau

Ridges and valleys

Source of
many rivers

Rounded mountains

Directions: Drag the check marks to the correct boxes.

A student is creating a table about Virginia's capitals. Place a check mark in the box next to each statement that shows a reason Virginia's capital was moved from Jamestown to Williamsburg.

	Reasons for Moving Virginia's Capital to Williamsburg
<input type="checkbox"/>	Fire had destroyed buildings.
<input type="checkbox"/>	People were moving westward to find more opportunities.
<input type="checkbox"/>	Williamsburg was an established town in Virginia.
<input type="checkbox"/>	Moving to Williamsburg increased the distance from possible attack by the British.
<input type="checkbox"/>	Salt water had contaminated the drinking water.



Directions: Select the correct answer.

Which document is being discussed?

I am thankful that our
English rights are protected
in this new colony.

Virginia Charters

Virginia Declaration of Rights

Virginia Statute for Religious Freedom

Declaration of Independence

Type your response in the box below

Directions: Drag the correct answer to the box.

Complete this chart.

Cause:

Many Virginians faced economic hardships during the Great Depression.



Effect:

Virginians participated in a forced work program.

The Freedmen's Bureau was established to provide food, schools, and medical care.

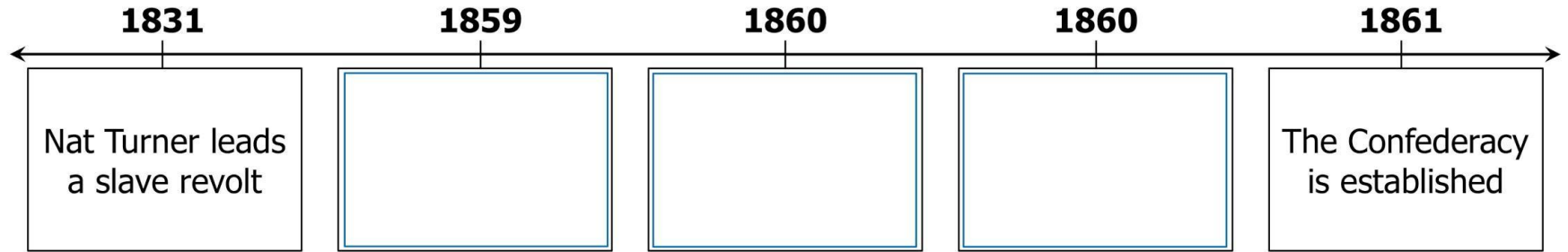
Many Virginians migrated to western territories through the Cumberland Gap.

New Deal programs were established to provide employment and other forms of aid.

Directions: Drag the answers to the correct boxes.

Complete this timeline.

Events Leading to the Civil War



Abraham
Lincoln is
elected
president

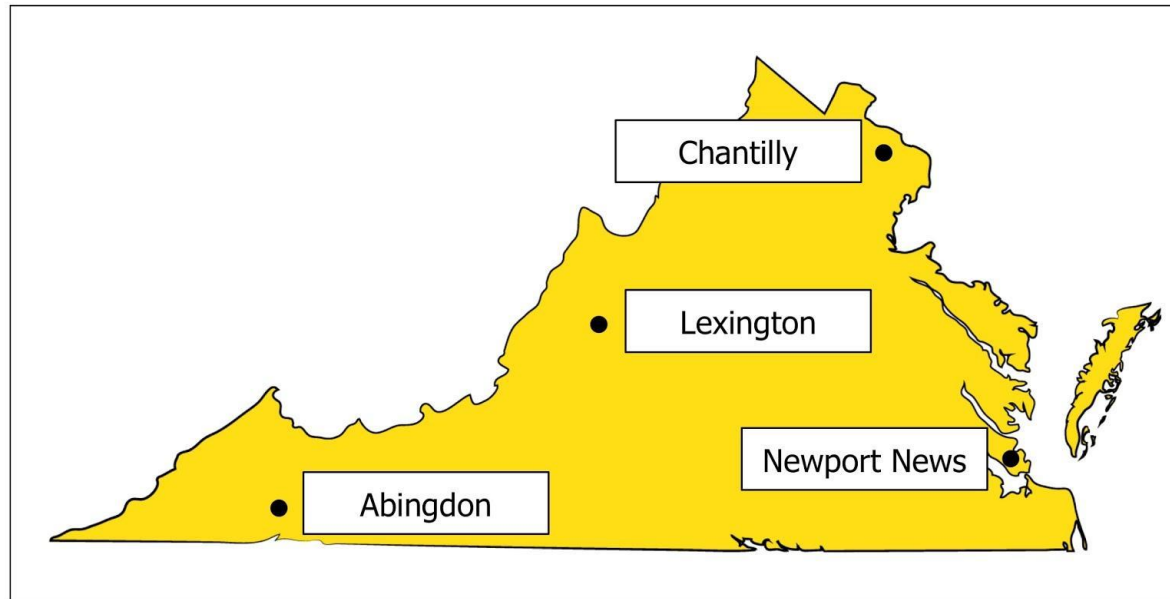
John Brown
attempts a
slave rebellion

South Carolina
secedes from
the Union

Directions: Select the correct answers.

Which two cities are located in areas where the computer technology industry created growth during the late twentieth and early twenty-first centuries?

Virginia



Directions: Drag the correct answer to the box.

Which group completes this table?

<ul style="list-style-type: none">• Served in the General Assembly• Represented the different divisions of Virginia• Elected by settlers• Took part in controlling their own government

Governor's Council

Stockholders

Burgesses

Delegates

Directions: Select the correct answer.

Which event happened first?

French troops fought alongside the colonists.

James Lafayette successfully requested his freedom.

The Declaration of Independence was written.


The British and Continental Armies fought at Yorktown.

Directions: Select the correct answers.

Which two images and captions represent factors affecting agriculture in Virginia following the American Revolution?



Tobacco had used up
the soil's nutrients



The mechanical reaper
allowed farmers to
grow more wheat



The land was marshy
and crops
couldn't grow



Native peoples showed
farmers how to harvest
tobacco and corn



Directions: Drag the correct answers to the boxes.

Label each headline with the location of the battle it describes.

Breaking News

VOL. XI NO. 4350 NEW ISSUE

**Confederate
Capital Falls**

Breaking News

VOL. XI NO. 4350 NEW ISSUE

**Soldiers Clash in
First Major Battle**

Breaking News

VOL. XI NO. 4350 NEW ISSUE

**No Winner
Declared in
Virginia Battle**

Charlottesville

Appomattox

Bull Run
(Manassas)

Richmond

Fredericksburg

Virginia Waters Near
Norfolk & Hampton

Directions: Drag the correct answer to the box.

Complete this chart to show which Virginian is responsible for these contributions.

<ul style="list-style-type: none">• Spoke out against the colonists being taxed without representation in Parliament• Inspired patriots from other colonies by saying "give me liberty or give me death"

Thomas Jefferson

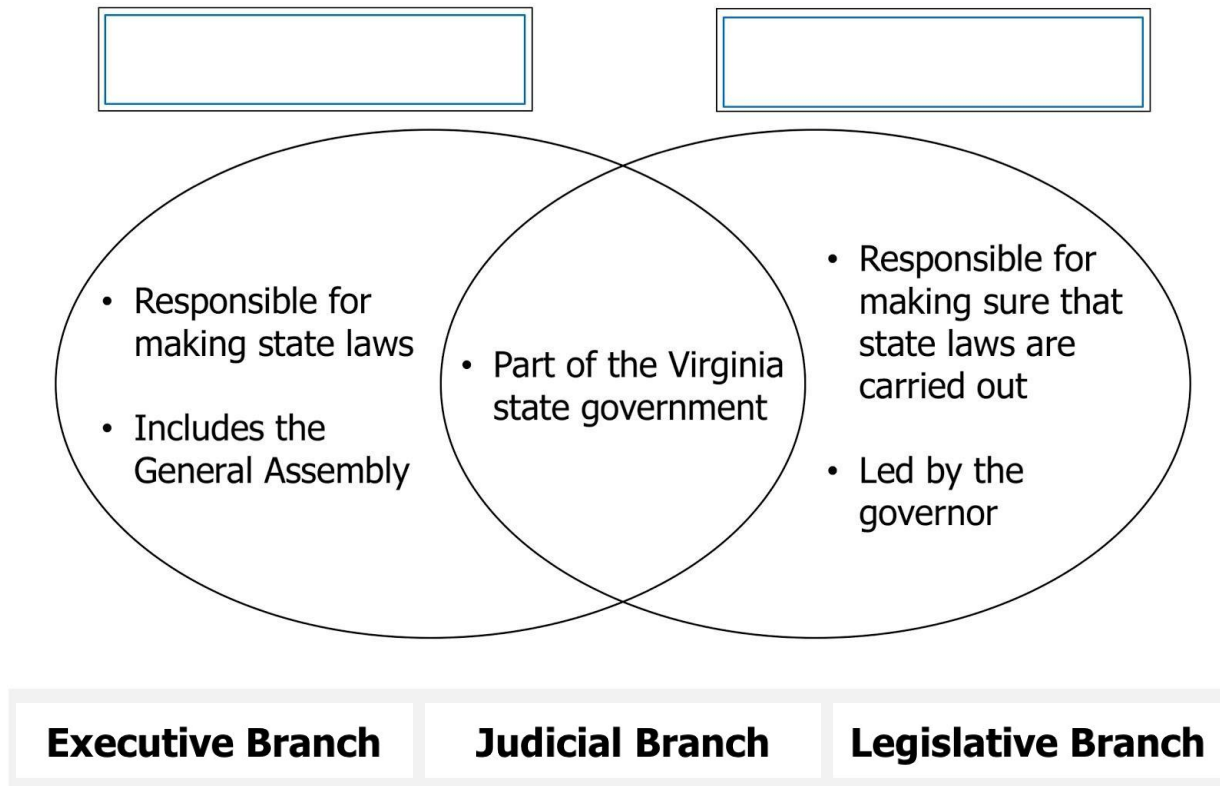
Patrick Henry

James Madison

George Washington

Directions: Drag the correct answers to the boxes.

Which titles best complete this diagram?



Directions: Select the correct answer.

A letter was found. Who was most likely the author of the letter?

Dearest Cousin,

We have just arrived in the Virginia colony. When we can buy a wagon and some horses, we plan to join our family in the Shenandoah Valley. It will be a long journey, but easy enough to follow the route so many have already traveled. We look forward to seeing them.

Love, Sarah

an African woman

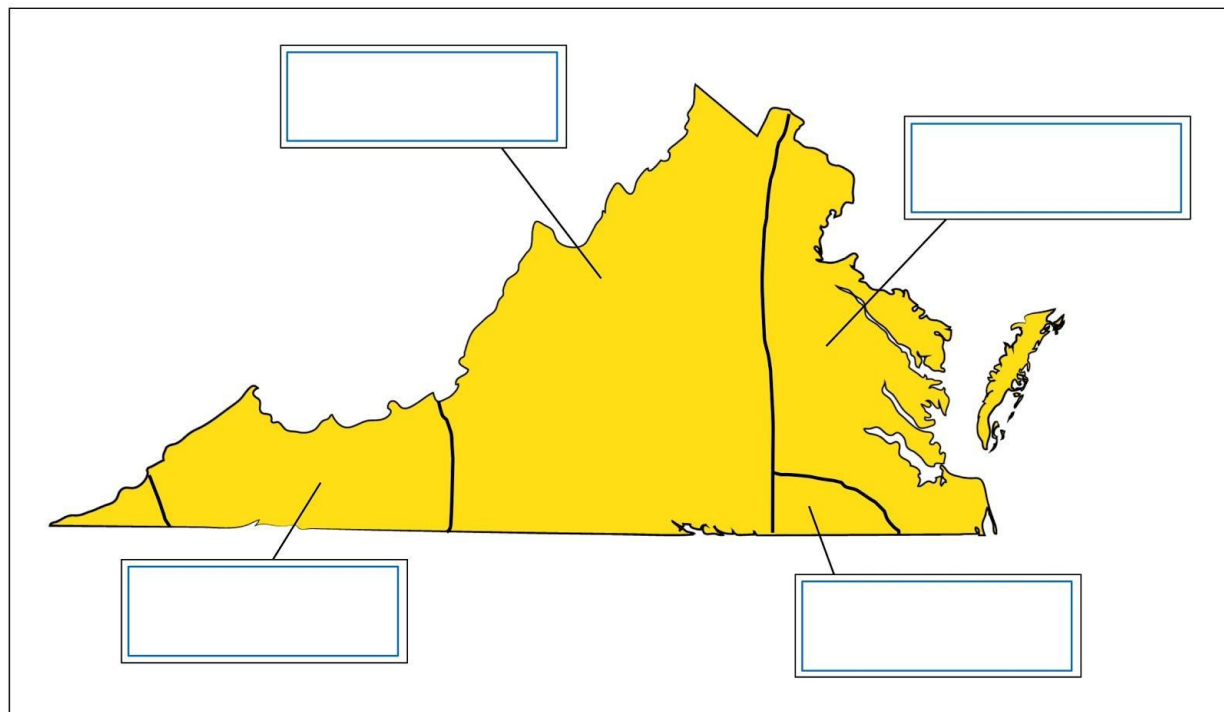
an English woman

an American Indian woman

a Scots-Irish woman

Directions: Drag each answer to the correct box.

Label this map.



Algonquian

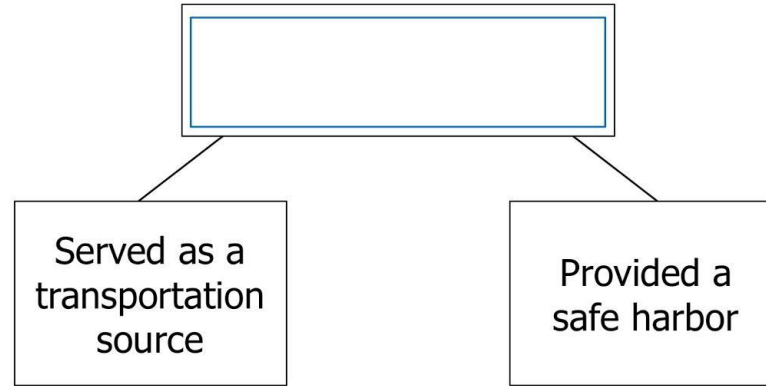
Iroquoian

Iroquoian

Siouan

Directions: Drag the correct answer to the box.

Which water feature completes this diagram?



Atlantic Ocean

Lake Drummond

Dismal Swamp

Chesapeake Bay

Directions: Select the correct answers.

What was the result of the introduction of this form of transportation?

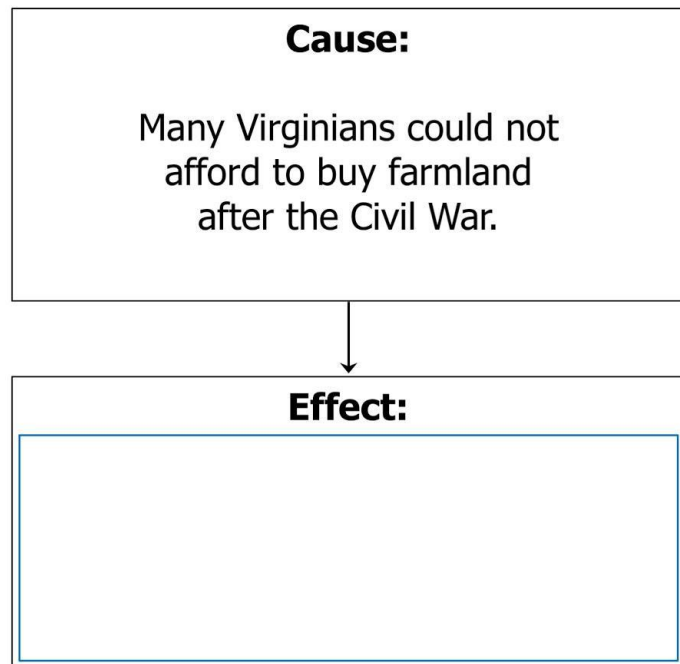


Accessed from the Library of Congress Online Collections

- **Crop prices fell, forcing many Virginia farmers to migrate elsewhere.**
- **The state's industries, businesses, and agriculture expanded.**
- **The coal mining industry in Virginia declined.**
- **Virginia's small towns grew into cities.**

Directions: Drag the correct answer to the box.

Complete this chart.



Farmers borrowed money from the General Assembly in order to buy land.

Virginia's agriculture industry disappeared.

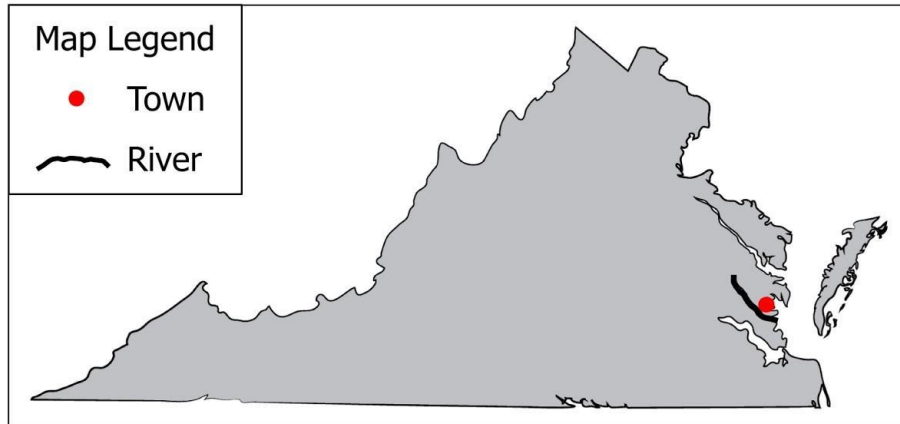
The Freedmen's Bureau bought farmland for freedmen and poor white farmers.

A new system developed in which people could rent land from landowners by agreeing to pay them a share of the crops.

Directions: Select the correct answer.

A ship traveling to Werowocomoco would travel on which river?

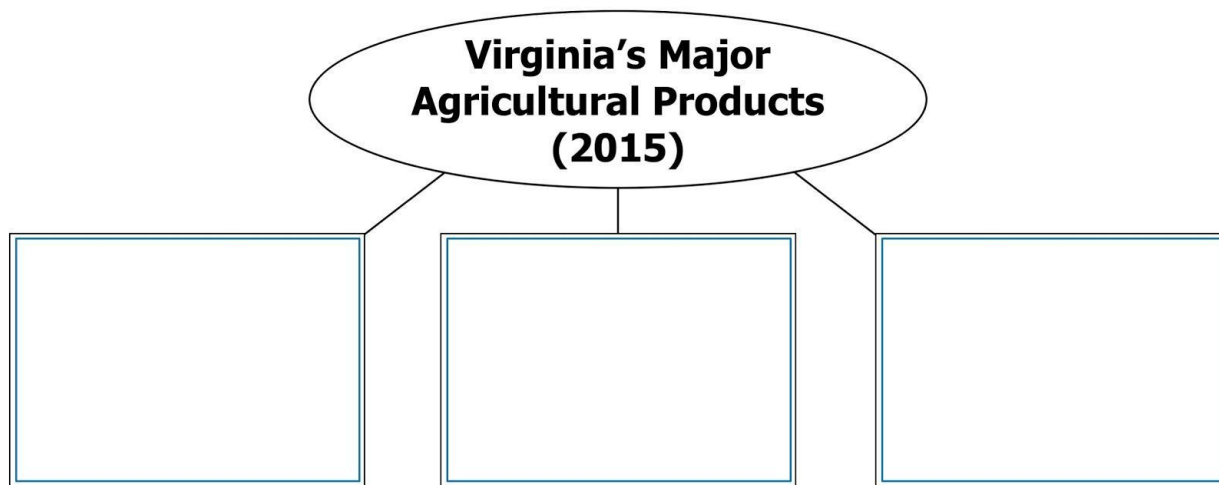
Virginia, 1600



- James
- Rappahannock
- Meherrin
- York

Directions: Drag the correct answers to the boxes.

Complete this diagram.



Directions: Select the correct answers.

Which two phrases describe the rights most important to George Mason?

Representatives attended a meeting to discuss the rights all people should have.

They discussed:

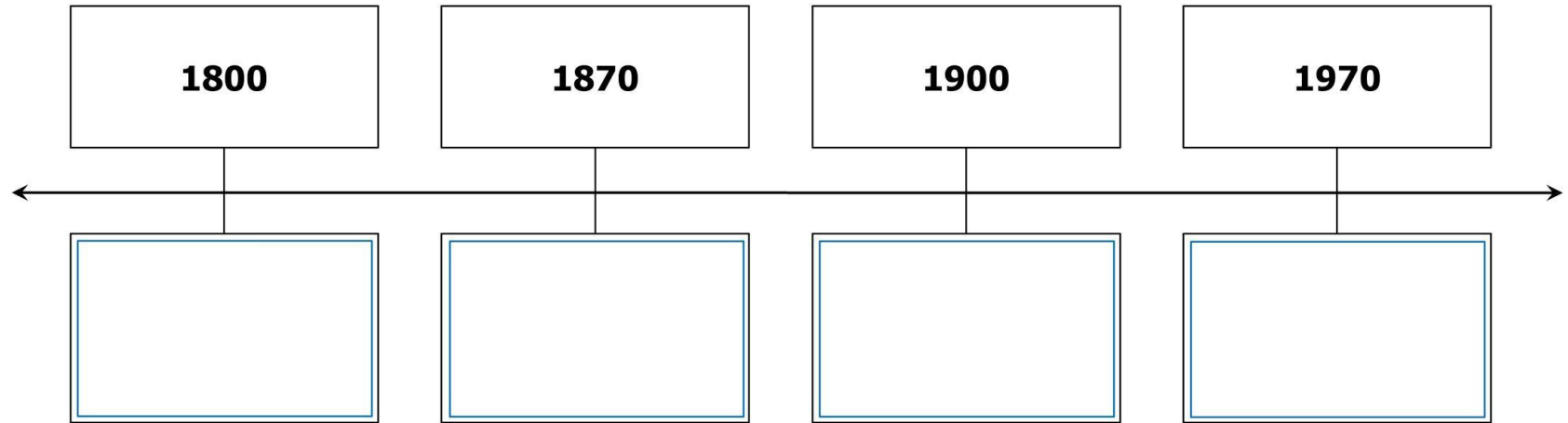
- **Freedom of the press**
- **Access to education**
- **Access to medical care**
- **Freedom of religion**
- **Freedom to choose any job**

After a long discussion, the representatives voted on the rights they believed were most important.

Directions: Drag the answers to the correct boxes.

Complete this timeline.

Voting Rights in the United States



African American
men experience
difficulties voting

Certain white
men can vote

Men and women
of all races
can vote

Black and white
men can vote
and hold office

Directions: Select the correct answer.

Which group would most likely have supported this type of meeting?

A sign was posted.

Meeting Tonight

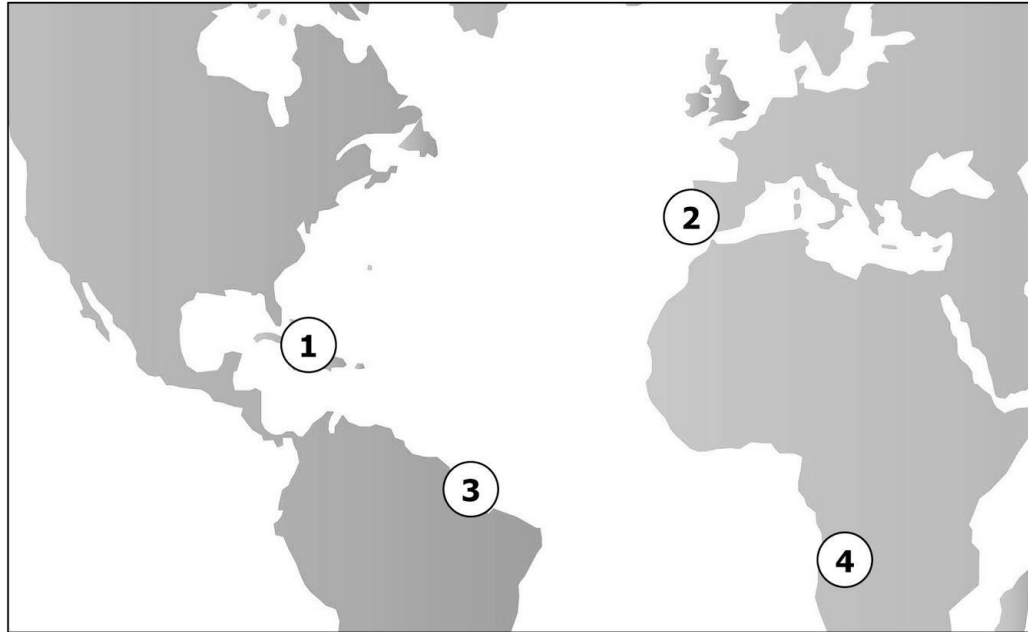
to Discuss the Colonial Response
to the Sugar Act

**Join Us
to Fight for Our Rights!**

- **Loyalists**
- **Patriots**
- **Neutral Virginians**

Directions: Select the correct answer.

African men and women were brought to the Jamestown settlement, against their will, after being captured from which location?



Directions: Drag the answers to the correct boxes.

Label each quote with the group of Virginians it describes during the Civil War.

Virginians During the Civil War

Enslaved African Americans	Free African Americans
American Indians	White Virginians

"I had to grow corn and wheat for the Confederate Army."

"Long live Jefferson Davis and the Confederacy!"

"I didn't want to support either the North or the South."

"I had many choices. I decided to join the Union Navy."

Directions: Select the correct answers.

Identify the forms of exchange commonly used in the early Virginia colony.

A settler uses paper bills to buy a loaf of bread.

A settler exchanges three ears of corn
for a loaf of bread.

A settler offers to pay a merchant two pounds of
tobacco next week if he can have a loaf of bread today.

A settler withdraws money from his bank account
and uses it to buy a loaf of bread.

Directions: Select the correct answers.

A student is researching George Washington's life. Which two sources would be the most helpful to the student?



**Military
Leaders of the
Continental
Army**



**Writing the
Declaration**



**Shaping the
Presidency**



**A History
of Virginia's
Governors**

Directions: Drag the correct answers to the boxes.

Which key issue and people complete these notes about Massive Resistance?

Key Issue:

Key People:

voting discrimination

segregation of public schools

Oliver W. Hill, Sr.

L. Douglas Wilder


Harry F. Byrd, Sr.

Directions: Drag the answers to the correct boxes.


Match two characteristics to each box.

Differences Between the North and South in the 1800s

Northern States



Southern States



The economy was
based on agriculture

The economy was
based on industry

Wanted new states
to be "free states"

Wanted new states
to be "slave states"

Directions: Select the correct answers.

Which images and phrases represent ways today's Virginia Indians maintain their culture?

Playing Violins



Making Pottery



Building Sailboats



Drumming



Designing Gardens



Wearing
Traditional Clothing



Directions: Drag the correct answer to the box.

Which phrase best completes this diagram?

Cause:

An American victory
occurred at



Effect:

The British colonial
governor fled Norfolk.

Yorktown

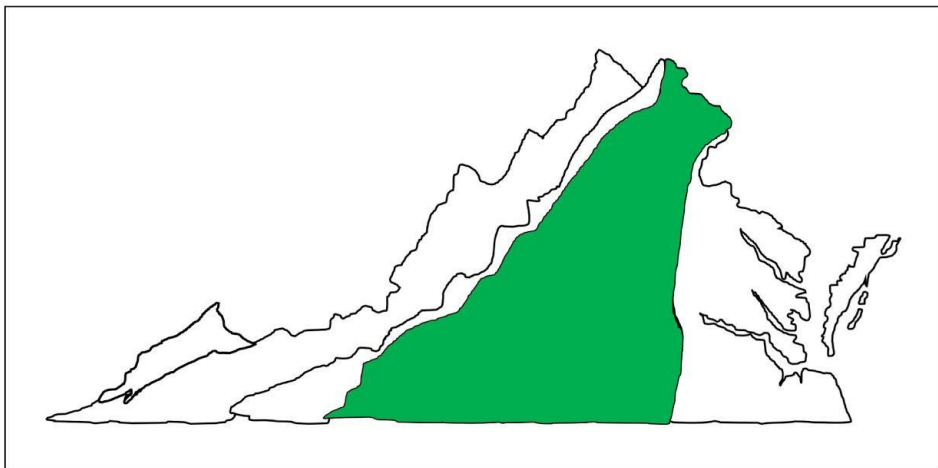
Hampton

Great Bridge

Fredericksburg

Directions: Select the correct answers.

Select three products or industries important to the region highlighted on this map.



Federal & State Government

Poultry

Horse Industry

Apples

Tobacco Products

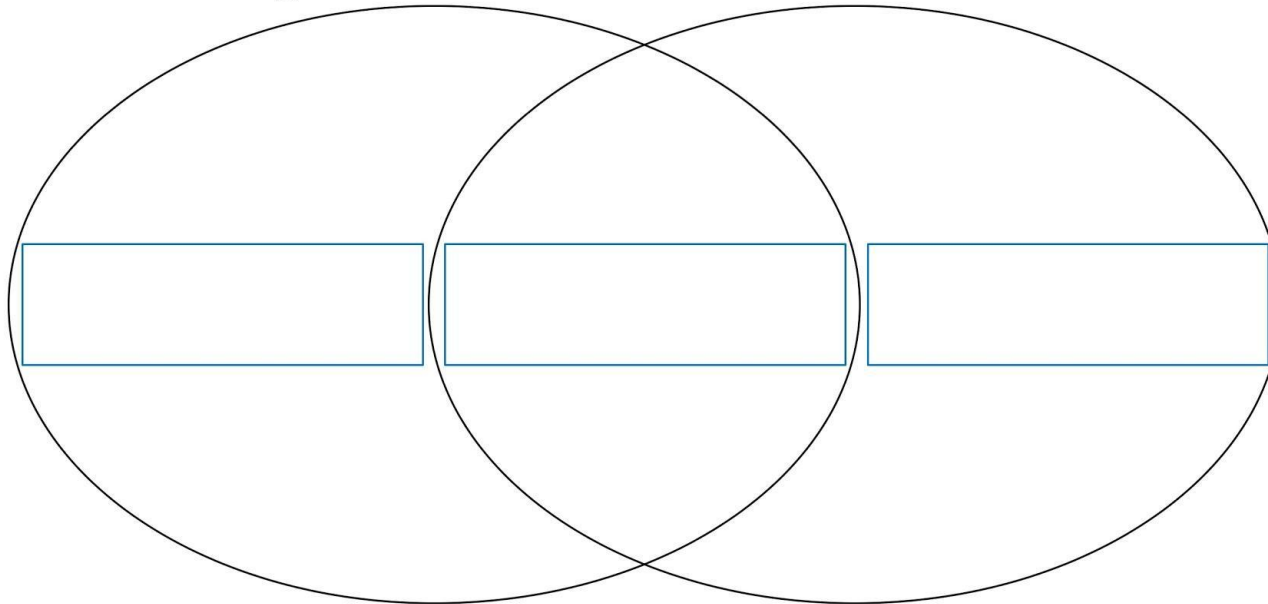
Tourism

Directions: Drag each answer to the correct location.

Which characteristic best completes each section of this diagram?

George C. Marshall

Woodrow Wilson



Worked toward
world peace

United States
President

United States
Military leader