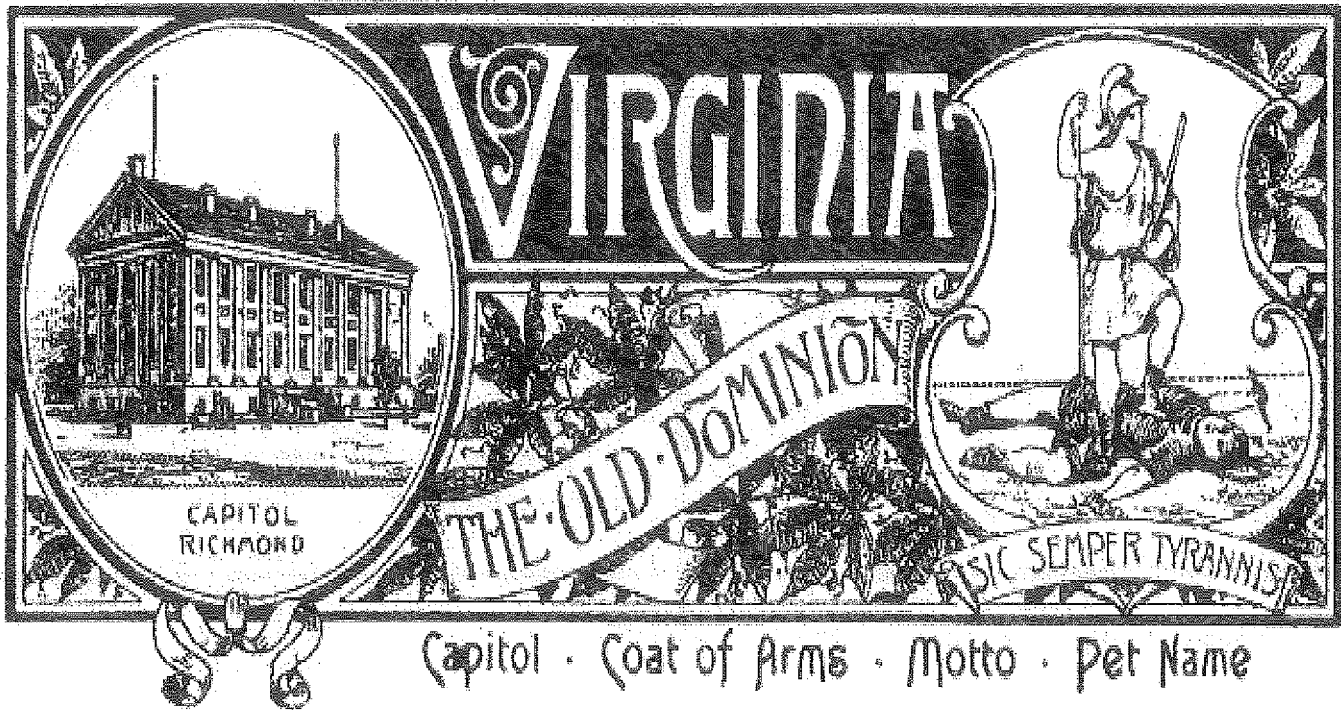
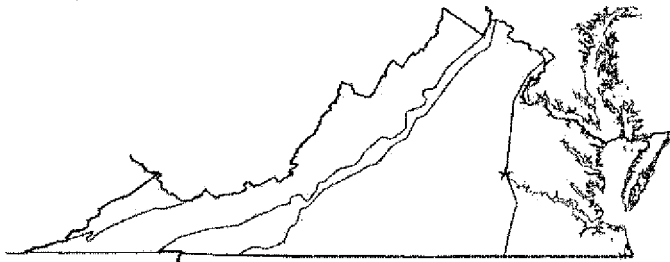


Virginia Studies Spiral Review



Name _____

VS.2b, 10b

1. Regions

Shade the Blue Ridge Mountains region on the map, and circle its products and industries below.

farming	tourism	peanuts
tobacco	apples	military
coal mining	beef	recreation

VS.2e

3. American Indians

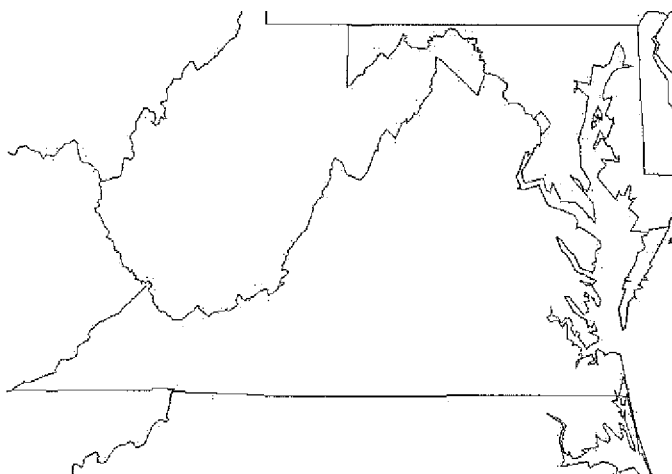
Below are the ways the American Indians survived throughout the year. Circle what they ate during the Winter.

hunted	fished	grew crops
harvested crops	preserved food for winter	
ate food stored in the fall	berries	

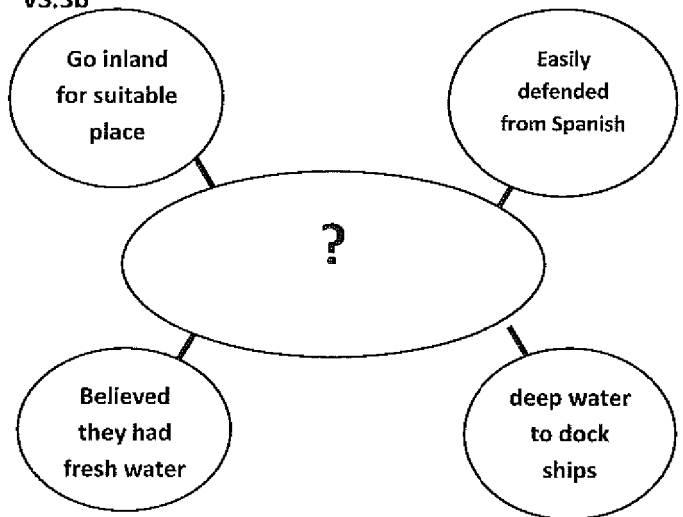
VS.2a

5. Maps

Label Virginia and the five bordering states.



VS.3b

2. Graphic Organizer

VS.2d

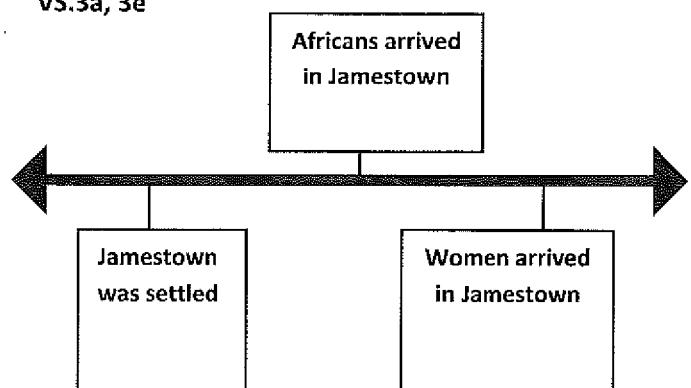
4. People

I'm the explorer who called the people I found in North America "Indians" because I thought I was in the Indies.

Who am I?

- a. Christopher Newport
- b. Juan Ponce de Leon
- c. Christopher Columbus
- d. King James III

VS.3a, 3e

6. Jamestown

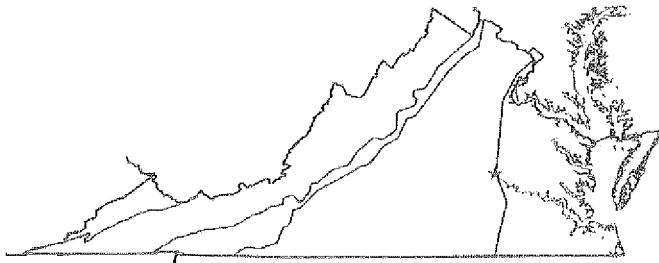
Directions: Write a year in each box that matches the description on the time line.

Name: _____

Lauren Jones Lincoln Terrace Elementary 2

VS.2b, 10b

1. Regions

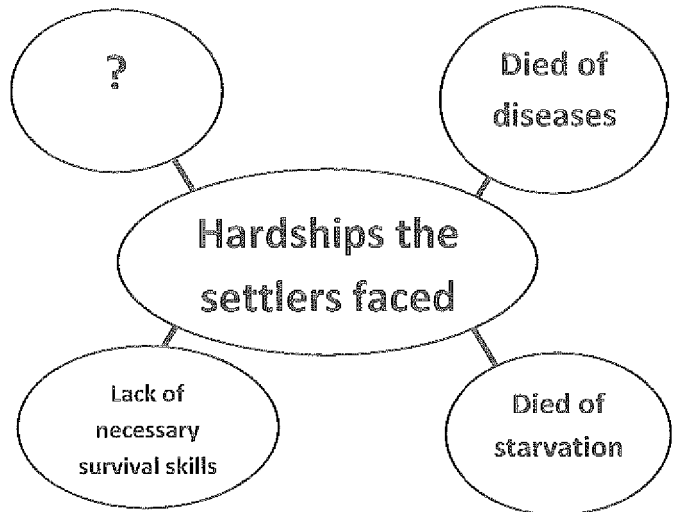


Shade the Coastal Plain region on the map, and circle its products and industries below.

farming	tourism	peanuts
tobacco	seafood	military
ship building	beef	recreation

VS.3f

4. Graphic Organizer



VS.2e

3. American Indians

List the American Indian Language Groups. Circle the one that the Powhatan belonged to.

1. _____
2. _____
3. _____

VS.3c

4. People

I granted the charters to the Virginia Company of London establish a settlement in North America and extend English rights to the settlers.


Who am I?

- a. Virginia Company of London
- b. Powhatan
- c. Christopher Columbus
- d. King of England

VS.2c

5. Maps

Label with the correct NUMBER the Virginia bodies of water.



- | | | |
|-------------------|-------------------|-----------------------|
| 1. Atlantic Ocean | 2. Chesapeake Bay | 3. York River |
| 4. Potomac River | 5. James River | 6. Rappahannock River |

VS.3e, 4a

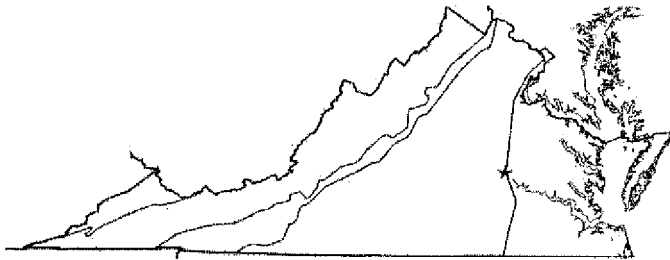
6. Jamestown

Circle ALL correct answers.

What was needed in order for Jamestown to have a successful economy?

artifacts	tobacco
slaves	buyers in England
women	Native Americans


VS.2b, 10b

1. Regions

Shade the Valley and Ridge region on the map, and circle its products and industries below.

farming	poultry	peanuts
apples	seafood	military
dairy	beef	horses

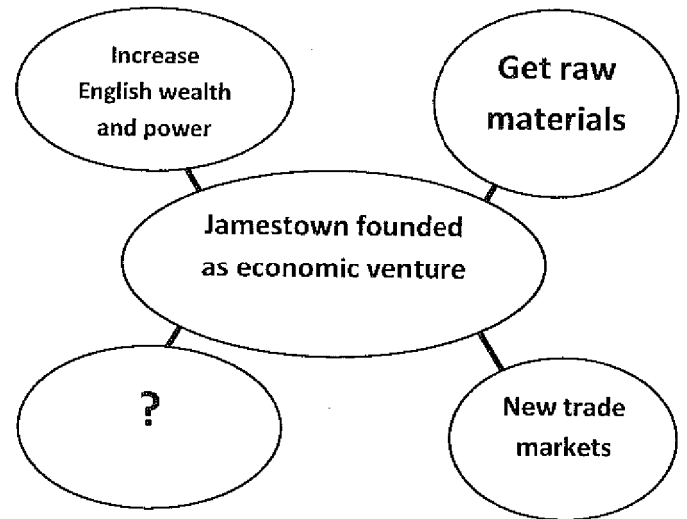
VS.2e

3. American Indians

_____ Siouan
 _____ Iroquoian
 _____ Algonquian

Directions: Put a number on each line for the language spoken in that area on the map.

VS.3a

1. Graphic Organizer

VS.3g

4. People

I initiated trading relationships with the settlers of Jamestown and the American Indians.


Who am I?

- King of England
- Powhatan
- Christopher Columbus
- John Smith

VS.2c

5. Maps

Label with the correct NUMBER the cities located along each river.



- | | | |
|---------------|--------------|-------------------|
| 1. Alexandria | 2. Richmond | 3. Fredericksburg |
| 4. Yorktown | 5. Jamestown | |


VS.3a, 3b

6. Jamestown

Directions: Fill in the blanks.

- Jamestown was found in _____ (year).
- Jamestown was primarily an _____ venture.
- During the settlers time Jamestown was a _____ bordered by water on three sides.
- Today Jamestown is an _____ on the James River.

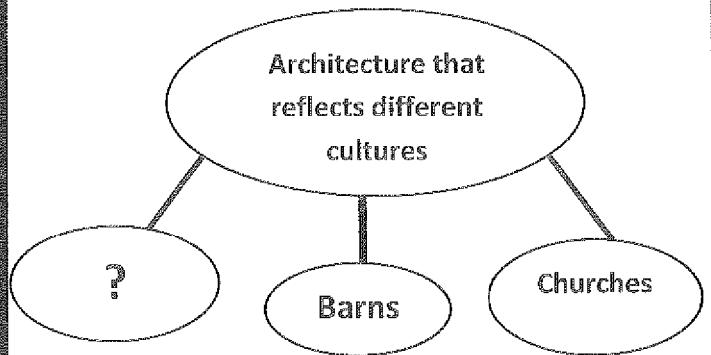
VS.2b, 10b

1. Regions

Shade the Piedmont region on the map, and circle its products and industries below.

farming	poultry	peanuts
apples	government	military
technology	beef	tobacco

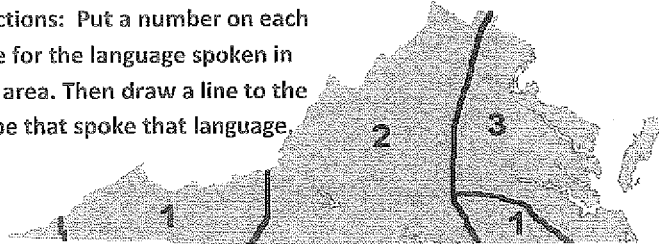
VS.3g

1. Graphic Organizer

VS.2e

3. American Indians

Directions: Put a number on each line for the language spoken in that area. Then draw a line to the tribe that spoke that language.



_____ Siouan	Powhatan
_____ Iroquoian	Monacan
_____ Algonquian	Cherokee

VS.4b

4. People

I served as a contact between the Native Americans and the English settlers.

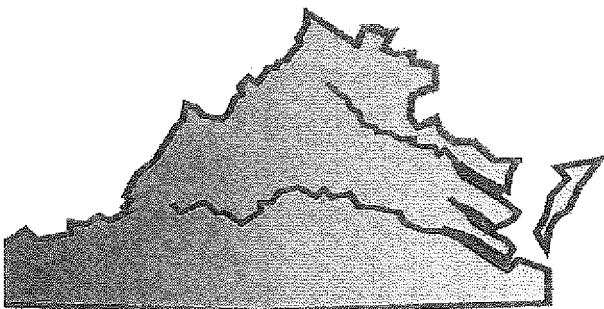
Who am I?

- a. King of England
- b. Powhatan
- c. Pocahontas
- d. John Smith

VS.2c

5. Maps

Directions: Fill in the Blanks.



The _____

region is a **SOURCE** of many rivers, which flow into the _____.

VS.3g

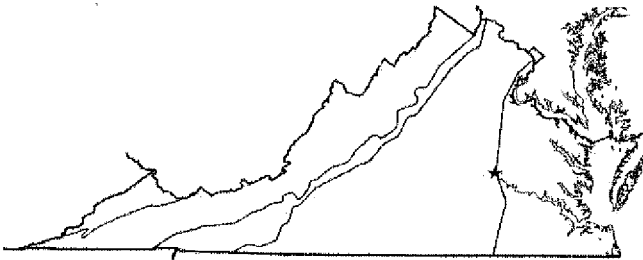
6. Jamestown

Directions: Choose **ALL** correct answers.

How did the Native Americans contribute to the survival of Jamestown?

- taught settlers survival skills
- made settlers clothing
- taught settlers how to grow crops
- gave settlers all their land
- had contact with the settlers
- let settlers live in their homes

VS.2b, 10b

1. Regions

Shade the Coastal Plain region on the map, and circle its products and industries below.

farming	poultry	peanuts
apples	government	military
technology	beef	tobacco

VS.2d

3. American Indians


List the American Indian Language Groups. Circle the one that the Cherokee belonged to.

1. _____
2. _____
3. _____

VS.2c

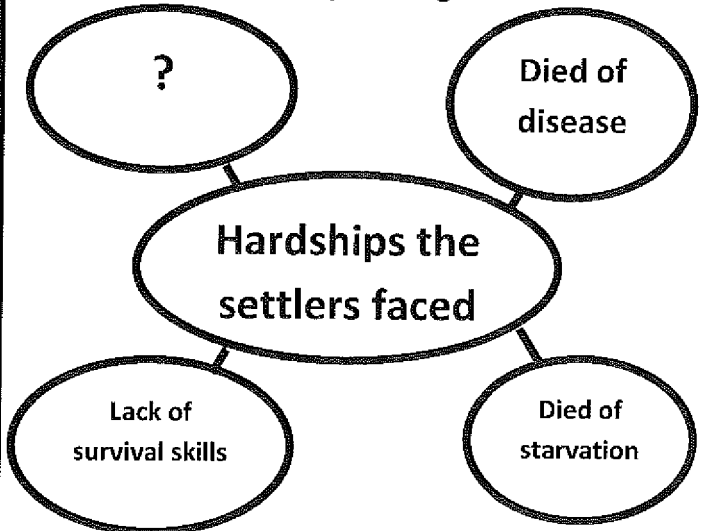
5. Maps

Label the river where Jamestown is located.



What other city is located on this river?

VS.3f

4. Graphic Organizer

VS.3a

4. People

We financed the settlement of Jamestown.

Who are we?

- a. Virginia Company of London
- b. Powhatan
- c. Christopher Columbus
- d. King of England

VS.3f

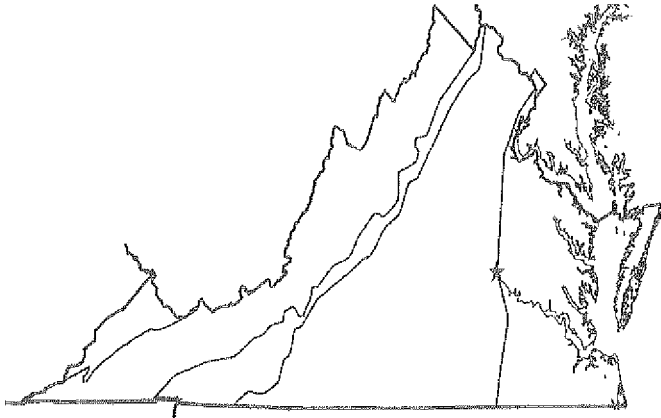
6. Jamestown

Circle ALL correct answers.

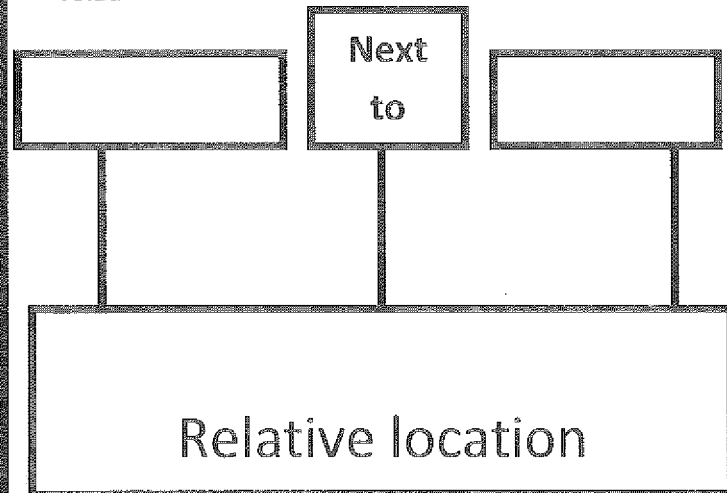
What changes took place that resulted in survival of the settlers in Jamestown?

- | | |
|-------------------------|-----------------------------|
| arrival of supply ships | lack of safe drinking water |
| forced work program | disease and starvation |
| lack of survival skills | emphasis on agriculture |

VS.2b

1. Regions
Label the Regions.

VS.2a

2. Graphic Organizer

VS.2d

3. American Indians

List two examples of artifacts that have been discovered in Virginia

VS.3f

4. People

I was a strong leader. I established the forced work program in Jamestown.

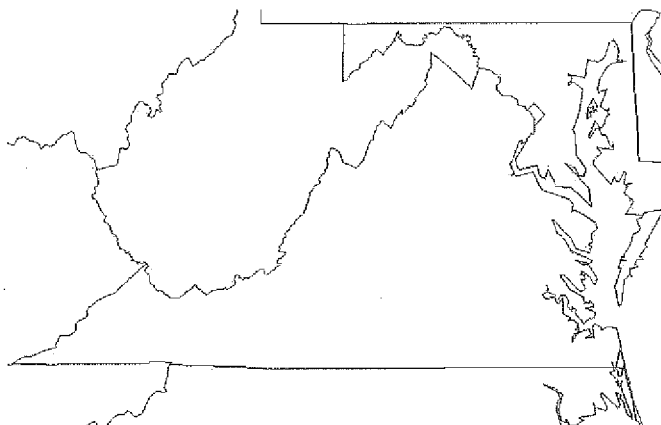
Who am I?

- a. George Washington
- b. Chief Powhatan
- c. John Smith
- d. King of England

VS.1i, 2b

5. Maps

Draw and label the Fall Line, then label the state that is to the south of the Fall Line.



VS.1b, 4a

6. Jamestown**Cause**

Virginia's most profitable cash crop became tobacco.

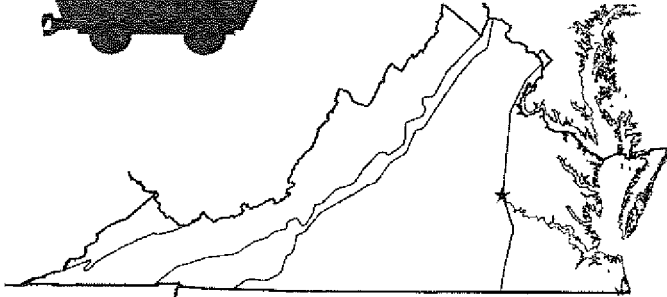

Effect

Virginia's economy became dependent on the need for _____ labor.

VS.2b

1. Regions

Label the region where this product is made.



VS.3d

2. Graphic Organizer

Governor

Governor's
council2 burgesses from
each division of
Virginia

_____	_____
-------	-------

VS.2f

3. American Indians

was the headquarters of the leader
Powhatan in 1607.

VS.3f

4. People

I was a strong leader. I established the forced
work program in Jamestown.

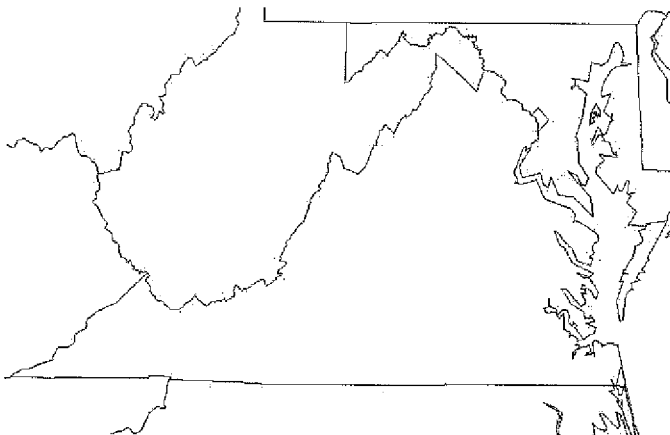
Who am I?

- a. George Washington
- b. Chief Powhatan
- c. John Smith
- d. King of England

VS.4c

5. Maps

Label the cardinal directions. Draw arrows in the direction
the population was moving when the capital was moved
from Williamsburg to Richmond.



VS.4c

6. Jamestown

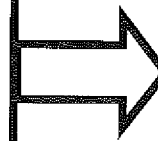
Cause

-contaminated
drinking water-unhealthy
living conditions
caused by
diseases-Fires destroyed
wooden and
brick buildings

Effect

The capital
was moved
from



to



VS.2b

1. Regions

Label the region where this product is made.



VS.4a

2. Graphic OrganizerSlave
LaborCash crop
sold to
EnglandVirginia colony
depended on
agriculture

VS.3d

3. Government

_____ was the first elected legislative body in English America, giving settlers the opportunity to _____ their own government.


VS.3e

4. People

_____ made it possible to make the Jamestown settlement permanent. They arrived in the year _____.

_____ made it possible to expand the tobacco economy. They arrived in the year _____.

VS.4b

5. MapsLabel the regions the English and Africans settled in.

VS.4d

6. Colonial Virginia

Cause



Few
people in
Colonial
Virginia
had paper
money.

Effect

People

instead of
using money
to get what
that needed.

VS.2b

1. RegionsLabel the regions where this product is made.

VS.5a

3. Government

British Parliament believed they had legal authority over the _____. They believe they had the right to _____ the colonies. _____

thought their local assemblies had legal authority. Colonists believe they should not be _____ since they had no legal _____ in

Parliament. (*Hint* No taxation without representation)

VS.4e

5. Drawing Conclusions

What Colonial Virginia people are pictured here?



VS.4d

2. Graphic Organizer

Cause

Few people had paper money in Colonial Virginia.

Effect

Colonial Virginia had _____ banks.

VS.4d

4. Vocabulary

Money

Barter

Debt

Credit

Savings

_____ is currency including coins and paper bills.

_____ is buying a good or service now and paying for it later.

_____ is money put away to spend at a later time.

_____ is trading goods and services without using money.

_____ is a good or service owed to another person.

VS.4e

6. Colonial Virginia

Directions: Draw lines to match.

One room with dirt floor

Food

Choices were limited

Clothes

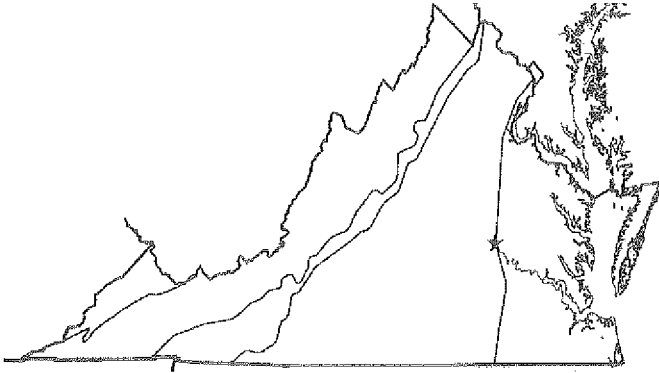
Handmade in your own household

Houses

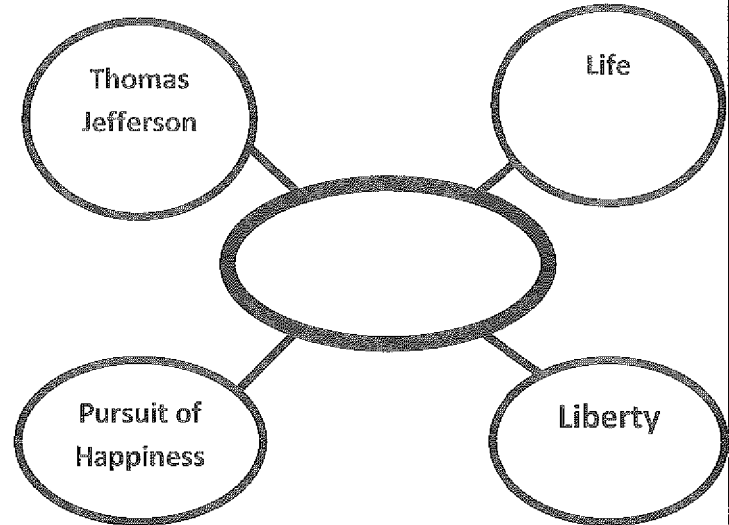
VS.2b

1. Regions

Label the region with flat land bordering the Atlantic Ocean and Chesapeake bay, east of the Fall Line.



VS.5a

2. Graphic Organizer

VS.5b

3. Revolutionary War

The Revolutionary War was fought between _____ and the

_____ who were fighting for _____.

VS.5b

4. People

I provided military leadership by serving as commander-in-chief of the Continental Army.

Who am I?

- a. Robert E. Lee
- b. Thomas Jefferson
- c. George Washington
- d. George Mason

VS.5b

5. Drawing Conclusions

Who would have fought for a better chance of freedom during the American

Revolution?

VS.5b

6. Revolutionary War

Directions: Draw lines to match.

Did not take either side

Patriots

Stayed loyal to Great Britain

Loyalists

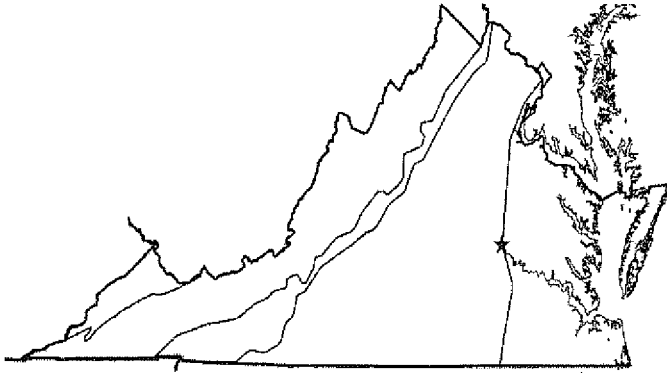
Fought for independence

Neutral

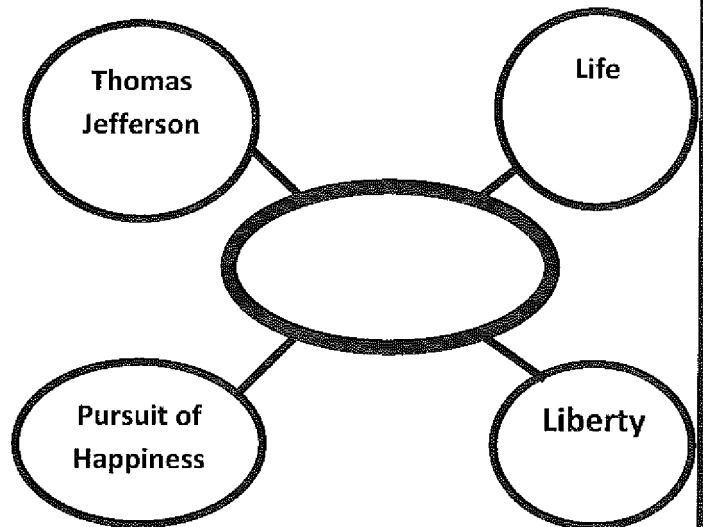
VS.2b

1. Regions

Label the region that includes the Great Valley of Virginia and other valleys separated by ridges, located west of the Blue Ridge Mountains.



VS.5a

2. Graphic Organizer

VS.5b

3. Revolutionary War

Circle all of the groups of people who fought for the Continental Army during the Revolutionary War.

Patriots

Loyalists

Women

Slaves

American Indians

Neutralists

VS.5b

4. People

I provided political leadership by expressing the reasons for colonial independence from Great Britain in the Declaration of Independence.

Who am I?

- a. Robert E. Lee
- b. Thomas Jefferson
- c. George Washington
- d. George Mason

VS.5b

5. Drawing Conclusions

What document inspired colonists to fight for independence in the Revolutionary War?

VS.5b

6. Revolutionary War

Directions: Draw lines to match.

"Give me liberty or give me death"

Women

Took on more responsibility to support the war effort

James Lafayette

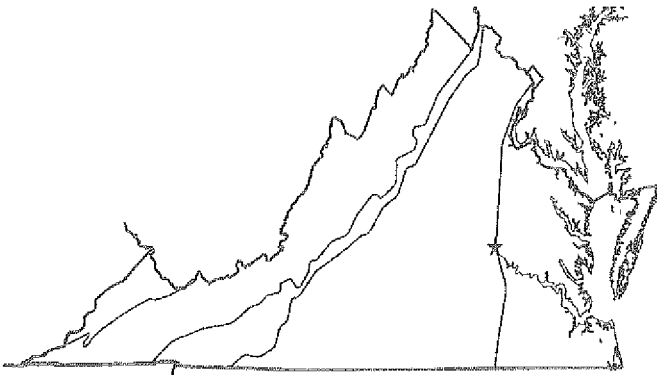
Fought for the Continental army, granted freedom

Patrick Henry

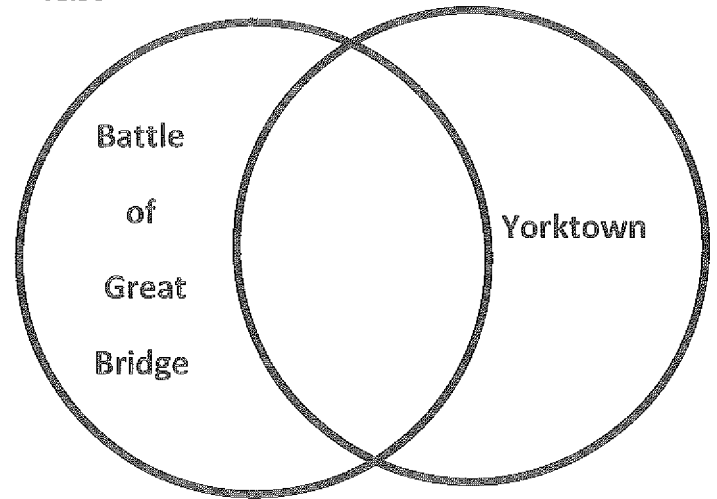
VS.2b,

1. Regions

Label the region that is located in Southwest Virginia.



VS.5c

2. Graphic Organizer

VS.5c

3. Revolutionary War

What was the first land battle of the
American
Revolution fought in Virginia?

VS.5c

4. People

I rode on horseback to Charlottesville to warn Thomas
Jefferson the British were coming to arrest him and
members of the General Assembly.

Who am I?

- a. James Lafayette
- b. Jack Jouett
- c. Woodrow Wilson
- d. James Madison

VS.5c

5. Drawing Conclusions

The _____
Surrendered at _____,
ending the Revolutionary War.

VS.5b

6. Revolutionary War

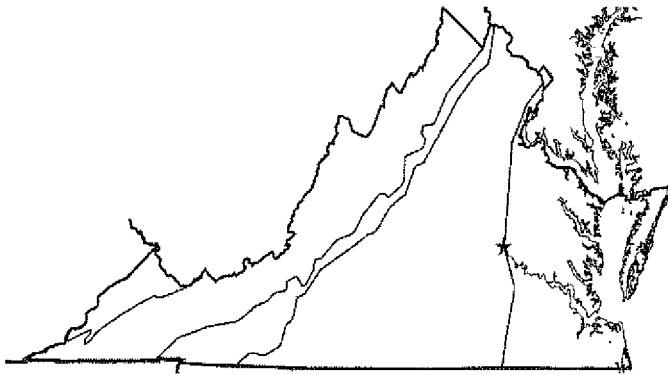
What document states that the authority to
govern belongs to the people rather than the
kings?

- a. The Charter
- b. The Declaration of Rights
- c. The Declaration of Independence
- d. The Constitution

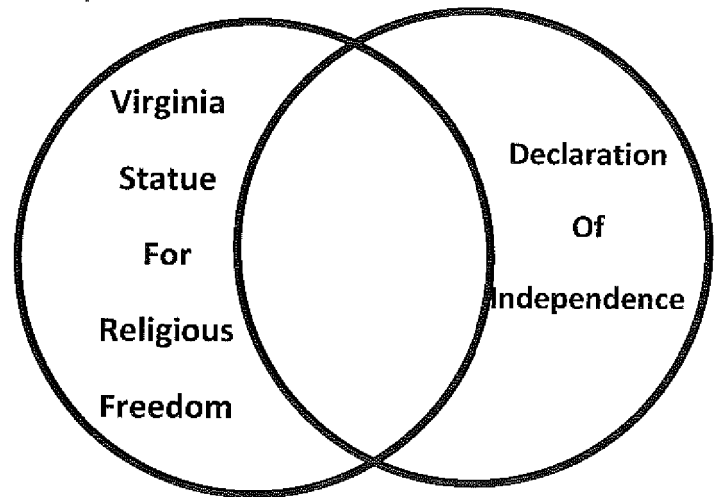
VS.2b,

1. Regions

Label the region that has rolling hills and is west of the Fall Line



VS.5a, 6a

2. Graphic Organizer

VS.6c

3. Farming

What caused farmers to move westward looking for new soil?

VS.6a

4. People

I am the "Father of Our Country".

Who am I?

- a. George Mason
- b. Thomas Jefferson
- c. Patrick Henry
- d. George Washington

VS.6a

5. Drawing Conclusions

James Madison kept good notes at the Constitutional Convention, and also helped many delegates come to agreements while writing the constitution. It is no wonder we call him the

_____.

VS.6a

6. Documents

What document written by Thomas Jefferson states that all people should be free to worship as they please?

- a. The Constitution
- b. The Declaration of Rights
- c. The Declaration of Independence
- d. The Statue for Religious Freedom

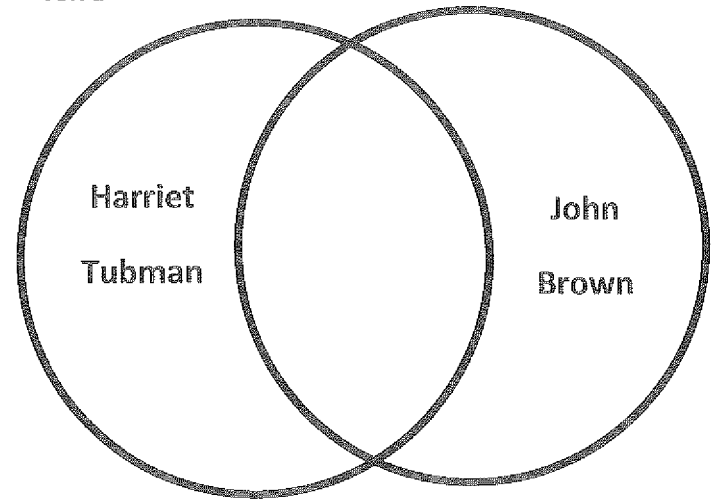
VS.7a

1. North or South

Label the picture with the name of the region whose economy was based on this.



VS.7a

2. Graphic Organizer

VS.7a

3. Civil War

Dear Sue,
I received word today that the next group of escaping slaves would be arriving tomorrow night. I will be looking out for them to arrive; I will feed them, and keep them safe until they move on.

Ben

What is Ben talking about?

VS.7a

4. People

I campaigned to end slavery.

I am an _____.

VS.7a

5. Maps

Draw an X on a free state.



VS.7b

6. Civil War Battles


The general of the Confederate Army was _____.

The general of the Union army was _____.

VS.7a

1. North or South

Label the picture with the name of the region whose economy was based on this.



VS.7b

2. Graphic Organizer

Directions: Put the correct number in each box starting with 1 for the event that happened first, and ending with 4 for the event that happened last.

Appomattox Court

Battle of Bull Run

Virginia secedes

Election of 1860

VS.7a

3. Civil War

Dear George,
I sure hope the next new state added to the United States allows slavery. I plan on moving there and getting more farm land so I can make more money.
Kevin

Which region does Kevin live in?

VS.7a

4. People

My Election as President in 1860 caused many Southern states to secede from the Union.
Who am I?

VS.7a

5. Maps

Draw an X on a free state.




VS.7b

6. Civil War Battles

What sea battle is pictured below?

Who won the battle?



VS.7a, 7b

1. North or South

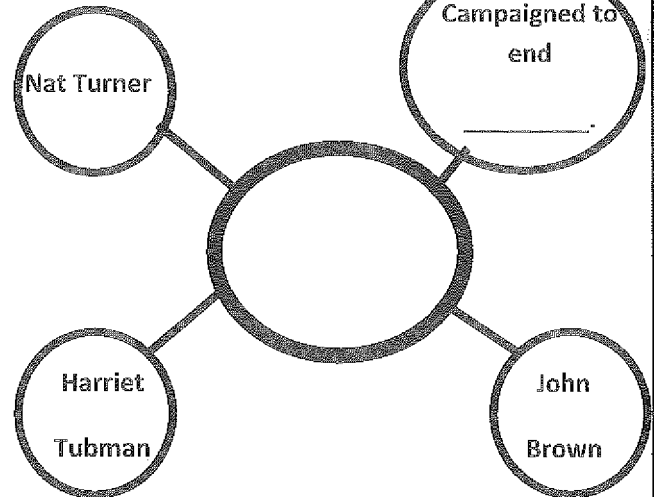
Industrialized	Free	Won	Grant	Agriculture
Abolitionists	Lee	Lost		Slave

Using the word bank, write the terms under the correct location.

NorthSouth

VS.7a

2. Graphic Organizer



VS.7a

3. Civil War

Dear Mike

I keep hearing rumors of a raid on the Harper's Ferry Armory. The goal is to start a slave rebellion. Wow, the leader of this raid must be brave to try this!

Mark

Who is Mark referring to?

VS.7b

4. People

The Civil War ended when I surrendered to Ulysses Grant at Appomattox Court House in April 1865.

Who am I?

VS.7a

5. Maps

Draw an X on a slave state, and then draw arrows to show the directions escaping slaves would travel.



VS.7b

6. Civil War Battles

Draw lines to match.

Fredericksburg

Lee defeated

Union Troops

Stonewall

Jackson

Confederate capital fell to Grant and was burned by Southerners.

Richmond

Battle of Bull Run

VS.8a

1. Reconstruction

Congress passed laws during Reconstruction in order to rebuild the _____ and bring the _____ states back into the _____.

VS.8a

2. Graphic Organizer**Cause**

Millions of freed African Americans needed housing, jobs, food, clothes, and education.

Effect

The government created _____

_____.

VS.8a

3. Reconstruction

The economy is in ruins! All the banks are closed, I cannot spend my money because it has no value, my plantation is destroyed, and so is the bridge from my house into town!

Where does this person live?

VS.8a

4. Vocabulary

What is sharecropping?

VS.7a

5. Maps

Circle the two states that used to be one before they disagreed over secession and slavery during the Civil War.



VS.8a

6. Matching

Draw lines to match.

Rebuilding

Helped newly freed slaves and other Virginians

Had no value

Reconstruction

Freedmen's Bureau

Money

VS.8a

1. Reconstruction
Circle the correct answer.

During Reconstruction men of all races could
vote.

True

False

VS.8a

2. Graphic Organizer**Cause**

Many
people did
not want
African
Americans
voting.

Effect

(List two ways African
Americans were kept
from voting)

1.

2.

VS.8b

3. Vocabulary

What is an unfair difference in the treatment of
people?

- a. segregation
- b. Jim Crow
- c. integration
- d. discrimination

VS.8b

4. Jim Crow

When we go to the store I cannot use the
“white” bathroom, and I cannot drink out of
their water fountain either. I don’t like our
water fountain, the water isn’t cold!

What is the person experiencing?

VS.7a

5. Maps

Circle the region that won the Civil War.



VS.8b

6. Jim Crow

African Americans were forced to use
separate and unequal facilities. List three
examples.

1.

2.

3.

VS.8c

1. Economic Growth

What was the key to growth and expansion of agriculture and industry?

- a. Roads
- b. Cars
- c. Railroads
- d. Tobacco

VS.8c

2. Graphic Organizer**Cause**

(Name the invention that made this happen)

Effect

Small towns grew into cities.

VS.8c

3. Location

Where were coal deposits found after the Civil War and Reconstruction?




- a. Roanoke City
- b. Richmond
- c. Tazewell County
- d. West Virginia

VS.8c

4. Economic Growth

Circle the correct picture.

Why were more and better roads needed?



VS.7a

5. Maps

Circle the region that lost the Civil War.



VS.8c

6. Economic Growth

After the Civil War and Reconstruction what crop and its products became important to the Virginia industries and economy again?

VS.9a

1. 20th Century

Virginia changed from an agricultural society to a

_____ society.

- a. Tobacco
- b. Farming
- c. Industrial
- d. Railroad

VS.9a

2. Graphic Organizer

Cause

Effect

People moved
from rural to
urban areas
for economic
opportunities.

Virginia's

grew.

VS.9a

3. Location

Choose all correct answers.

During the 20th century which areas grew due to computer technology?



- a. Tidewater
- b. Richmond
- c. Tazewell County
- d. Appalachian Plateau
- e. Northern Virginia
- f. Roanoke City

VS.9a

4. Economic Growth

Circle the correct picture.

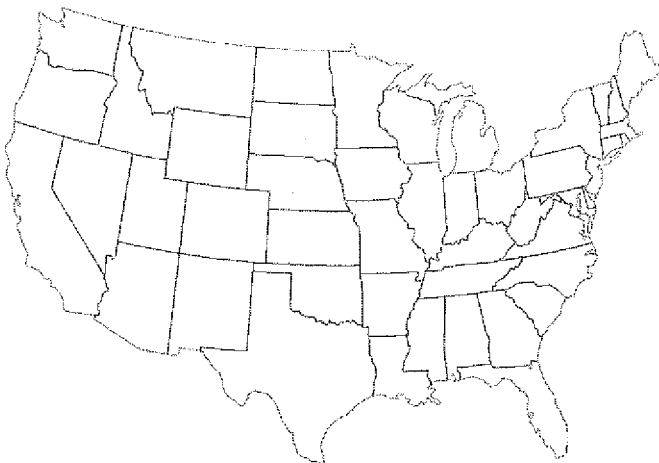
Which product's low prices would have encouraged Virginia to change from an agricultural to industrial society?



VS.8b

5. Maps

Circle the region where segregation mostly occurred.



VS.9b

6. 20th Century

1. I was a 20th century president who wrote a plan for world peace. Who am I?

2. I was a military leader who created an economic plan to ensure world peace. Who am I?

George C.
MarshallWorked for
worldWoodrow
Wilson

3. _____

VS.8b

1. Vocabulary

The separation of people usually based on race
or religion is known as--

- a. Discrimination
- b. Segregation
- c. Integration
- d. Racism

VS.9c

2. Graphic Organizer**Cause**

After WWII
African
Americans
demanded
equal
treatment and
recognition of
their rights as
American
Citizens.

Effect

The _____

included the
passing of laws that
made racial
discrimination
illegal.

VS.9c

3. Civil Rights

In 1954 The United States Supreme Court ruled
that " _____ but _____ "
public schools were unconstitutional. All schools
including ones in Virginia were ordered to
desegregate.

VS.9c

4. Desegregation

Directions put the correct number in each box starting with 1 for
the event that most likely happened first, and ending with 4 for
the event that most likely happened last.

Some schools closed to avoid integration

Massive Resistance failed, Virginia's schools integrated

Harry F. Byrd lead Massive Resistance against desegregation

Virginia government established Massive Resistance

VS.9c

5. Maps

Put an X on a state that would have had segregated
schools.



VS.9d

6. Civil Rights

I was a lawyer and civil rights leader
who worked for equal rights for
African Americans. I played a key role
in Brown v. Board of Education.

Who am I?

VS.8b

1. Vocabulary

2.

What term means to abolish racial segregation?

- a. Discrimination
- b. Segregation
- c. Integration
- d. Desegregation

VS.9d

3. Contributions of Citizens in the 20th and 21st centuries

Directions: Write the number of the person described below on the blank.

- | | |
|-----------------------|--------------------------|
| 1. Maggie L. Walker | 2. Harry F. Byrd Sr. |
| 3. Arthur R. Ashe Jr. | 4. A. Linwood Holton Jr. |
| 5. L. Douglas Wilder | |

_____ First African American to be elected as a Governor in the United States, Governor of Virginia.

_____ Governor, "Pay As You Go" policy for road improvements, modernized Va state government.

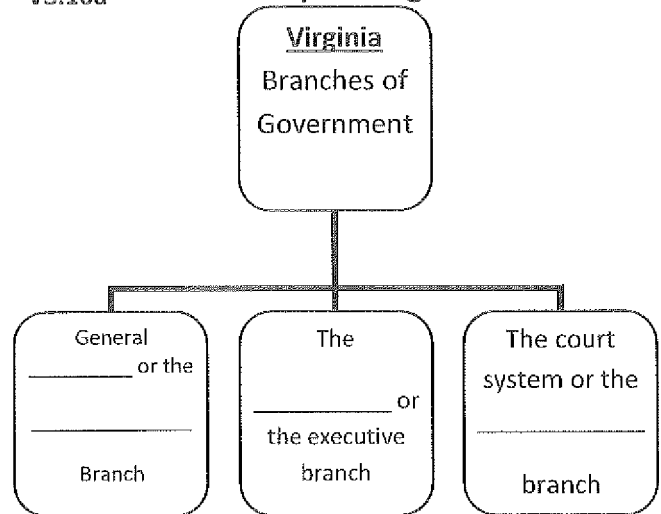
_____ First African American woman bank president.

_____ Governor of Virginia, promoted racial equality, appointed more African Americans and women to positions in state government than previous governors.

_____ First African American winner of major men's single tennis championship, author, and eloquent speaker for social change.

VS.10a

3. Graphic Organizer



VS.10c

4. Virginia Today

Fill in the blank with the correct vocabulary term.

- | | |
|--------------------|---------------|
| Exports | communication |
| Technology | tourism |
| Federal government | raw materials |

1. Virginia's transportation system moves _____ and finished products to markets.

1. Virginia _____ agricultural and manufactured products including poultry, tobacco, coal, and large ships to other places.

2. Virginia has a large number of _____ and other

_____ industries, to keep us connected to others.

3. _____ is a major part of Virginia's economy. Because many federal workers live and/or work in Virginia the _____ has a significant impact on Virginia's economy.

1. Jamestown

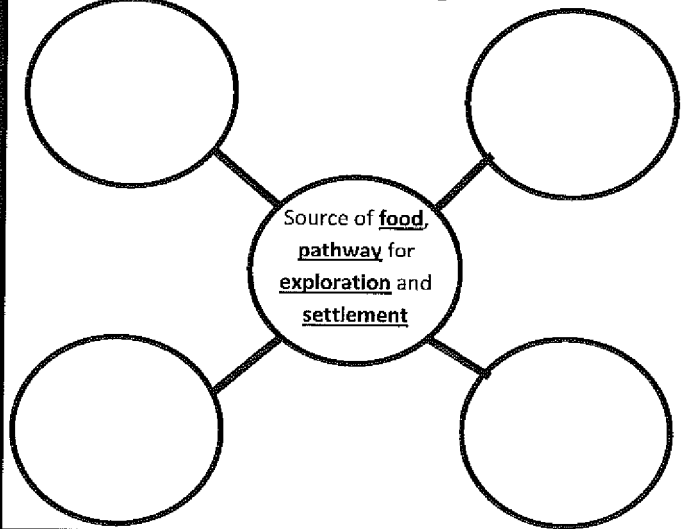
VS.3g

Over time the Native Americans realized the Jamestown settlement would continue to grow.

This caused the Native Americans to see the settlers as _____ who would take their _____.

- a. Friends, land
- b. Enemies, money
- c. Invaders, land
- d. Partners, money

VS.2c

2. Graphic Organizer

VS.5,6,7

3. Civil & revolutionary Wars

Directions: Fill in the blank, and then write the name of the war related to the information in the box below.

Declaration of Independence

Written by _____

VS.7a

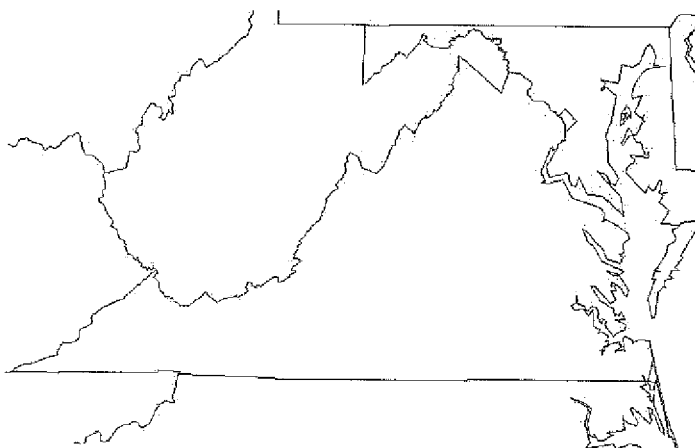
4. Vocabulary

I live in Colonial Virginia. I make a lot of money from my _____ crops. I do not like to spend my money; I like to keep it in case I need it. I make sure I am _____ my money.

VS.2c

5. Maps

Directions: Circle the body of water that provided transportation links between Virginia and other places such as Europe and Africa.



VS.7b

6. People

Who wrote this?

... all men are by nature equally free and independent; and have certain inherent rights, of which when they enter into a state of society, they cannot, by any compact, deprive or divest their posterity; namely, the enjoyment of life and liberty, with the means of acquiring and possessing property, and pursuing and obtaining happiness and safety.

—Virginia Declaration of Rights, 1776

VS.3a

1. Settlement

England wanted to establish an American colony to increase their _____ and _____.

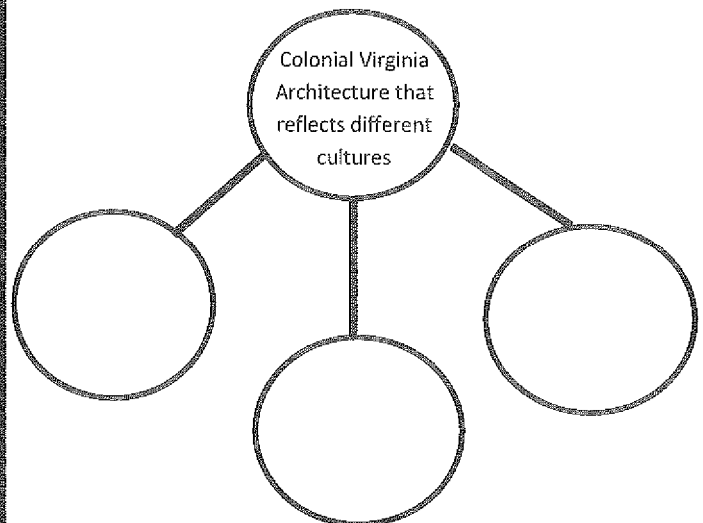
- a. Land, tobacco
- b. Enemies, wealth
- c. wealth, power
- d. raw materials, venture

VS.5,6,7 **3. Civil & revolutionary Wars**

Directions: Write the name of the war related to the information in the box below.

The western counties of Virginia disagreed over the issue of slavery, leading to the creation of West Virginia.

VS.4b

2. Graphic Organizer

VS.7a

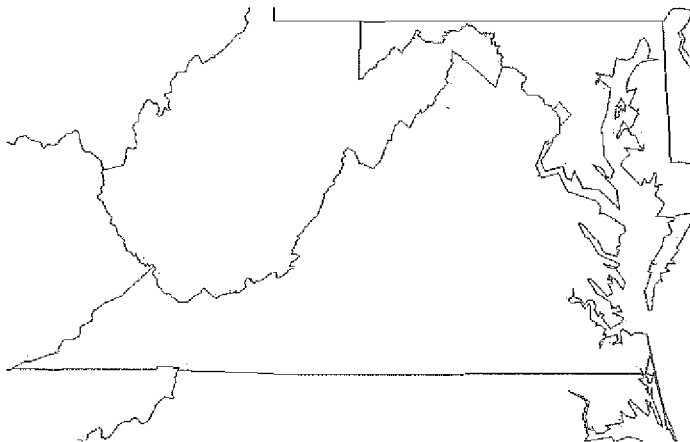
4. Vocabulary

I grow tobacco, and John makes clothes. Since neither of us have any money, so he gave me a pair of pants and I gave him tobacco. What is this an example of?

VS.2c

5. Maps


Directions: Circle the body of water that provided a safe harbor and was a source of food and transportation.



VS.6a

6. People

Who wrote this?



1. Settlement & Jamestown

VS.3a, e

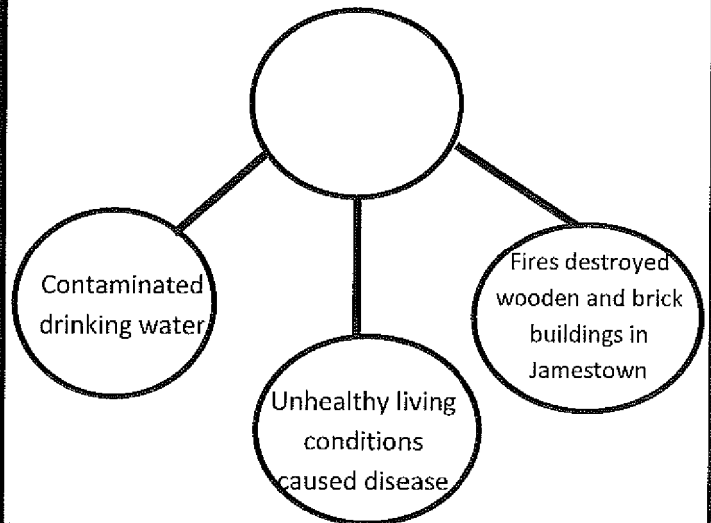
Directions: Write a 1 in the box of the event that happened first, 2 second, 3 last. **THEN** circle the event that made it possible to expand the tobacco economy.

Women arrived in Jamestown

Africans arrived in Jamestown

Settlers arrived in Jamestown

VS.4c

2. Graphic OrganizerVS.5,6,7 **3. Civil & revolutionary Wars**

Directions: Write the name of the war related to the information in the box below.

James Lafayette an enslaved African American successfully requested his freedom after the war.

VS.2d

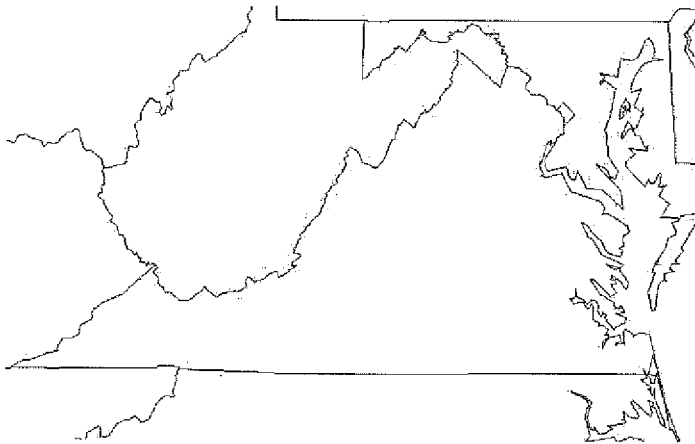
4. Vocabulary

I found some arrow heads and pottery in the Tidewater region. I have learned a lot about the Powhatan Indians from these _____.

VS.2c

5. Maps

Directions: Label the bordering states, and then circle the one to the south of Virginia.



VS.6a

6. People

Who am I?

First African American elected a governor in the United States, governor of Virginia.

1. Native Americans

VS.2e

Directions: complete the food the Indians ate or how they survived during each season.

Winter

- Hunted

-

Spring

- Hunted, picked berries

-

Summer

Grew crops (list three)

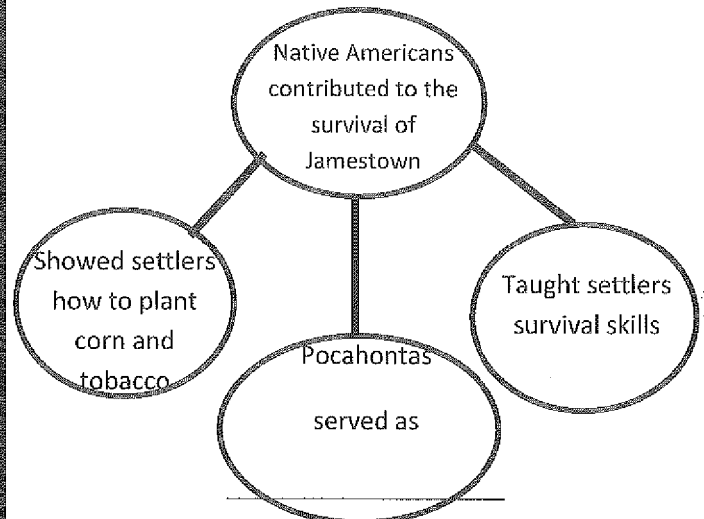
-

Fall

- Harvested crops

- Hunted food to _____

VS.4c

2. Graphic OrganizerVS.5,6,7 **3. Civil & revolutionary Wars**

Directions: Fill in the blank, and then write the name of the war related to the information in the box below.

_____ campaigned to end slavery.

VS.2c

4. Vocabulary

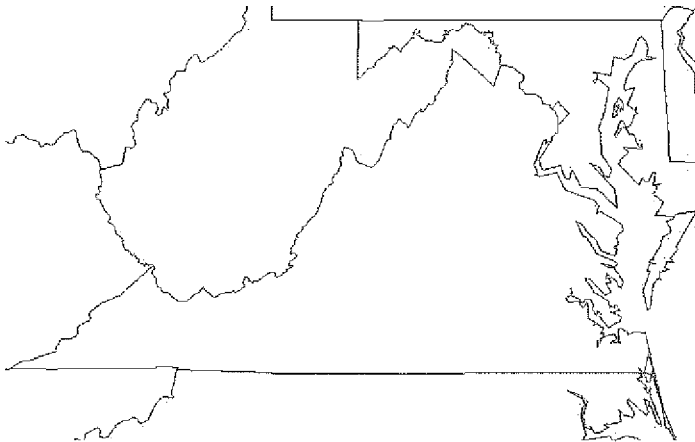
A piece of land bordered by water on three sides is a

_____.

VS.2c

5. Maps

Directions: Label the state that was created during the Civil War due to disagreements over slavery.



VS.6a

6. People

Who am I?

I played a key role in the *Brown v. Board of Education* decision.

1. Settlement, Jamestown, Colonial Virginia

VS.2c

Directions: List the city located along each river.

Potomac RiverRappahannock RiverYork RiverJames River

What body of water do all these rivers flow into?

VS.5,6,7 3. Civil & revolutionary Wars

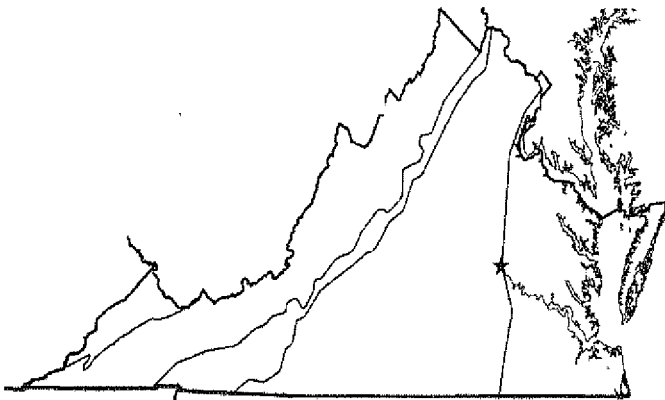
Directions: Fill in the blank, and then write the name of the war related to the information in the box below.

_____ was the commander-in-chief of the Continental Army.

5. Maps

VS.2c

Directions: Draw an X on the region of Virginia where tobacco farming took place before the Revolutionary war, then draw arrows to show the directions farmers looked for new land since tobacco farming was hard on the soil.



VS.5a

2. Graphic OrganizerCause

England's Parliament believed it had legal authority over the colonies

Effect

_____ was written in the colonies and states the authority to govern belongs to the people.

VS.4d

4. Vocabulary

This month my share of the crop was not enough to cover the rent of the land I use. I am now in _____ to the land owner.

VS.6a

6. People

Who am I?

I spoke out against taxation without representation and my famous quote is "Give me liberty or give me death!"

1. Settlement, Jamestown, Colonial Virginia

VS.2c

Directions: List the river each city is located along.

AlexandriaFredericksburgYorktownJamestown

Many of these cities developed along the _____, the natural border between the Tidewater and Piedmont.

VS.5,6,7 3. Civil & revolutionary Wars

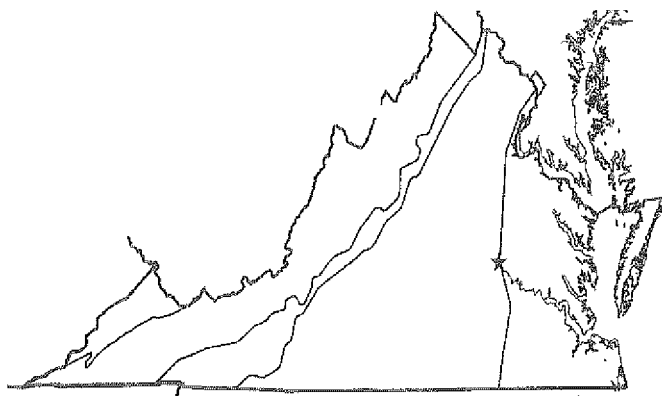
Directions: Fill in the blank, and then write the name of the war related to the information in the box below.

Abraham Lincoln's election caused southern states to _____.

VS.2b, 10b

5. Maps

Directions: Draw an X on the region of Virginia where recreation is an industry.



VS.2c

2. Graphic OrganizerCause

The Dismal Swamp has a verity of wildlife.

Effect

The Dismal Swamp was explored and surveyed by _____.

VS.4d

4. Vocabulary

I now get to go to school with my friend, even though she is white and I am an African American What a great day! We are so glad our schools were _____.

VS.6a

6. People

Who am I?

I was the first African American woman to become a bank president in the United States.

1. Reconstruction – Present Day

VS.9c

What was the movement in which African Americans demanded equal treatment and recognition of their rights as American citizens?

VS.5,6,7 **3. Civil & revolutionary Wars**

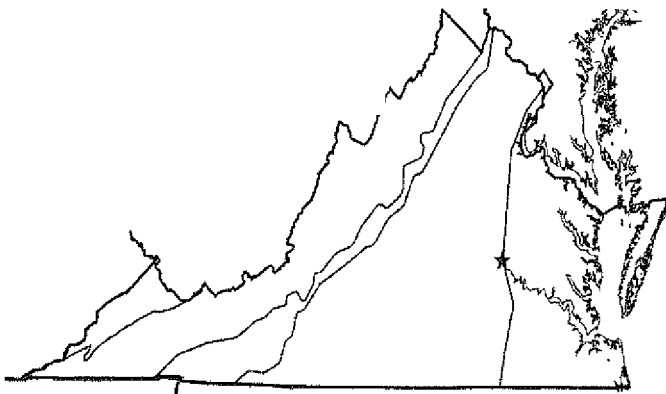
Directions: Fill in the blank, and then write the name of the war related to the information in the box below.

I am fighting alongside my fellow colonists against England. I am a _____.

5. Maps

VS.2c

Directions: Label the peninsula bordered by the Atlantic ocean on the east and the Chesapeake Bay on the west.



VS.8a

2. Graphic OrganizerCause

During Reconstruction Virginia's Economy was in ruins.

Effect

Virginia's money had _____.

VS.8b

4. Vocabulary

I cannot afford the unfair _____

_____ I am forced to pay when I go to vote! I hope they abolish those laws soon because I deserve to vote just like everyone else!

VS.5c

6. People

Who am I?

I rode on horseback to warn Thomas Jefferson, then governor of Virginia, that the British were coming to arrest him and members of the General Assembly.

Directions: In the box below each sign write the name of the person who is described.

Initiated trading
relationships with
the Native People

VS.3g

Granted charters to
the Virginia
Company of London

VS.3c

Chief of many
tribes

VS.3g

"Father of Our
Country"

VS.6a

President of the
Union

VS.7b

Confederate
General

VS.7b

Union General

VS.7b

"Pay as You Go"
policy

VS.9d

"Father of the
Constitution"

VS.6a

Directions: Write your answers in the box below each news article.

NEWS

Event: British Surrender to the Colonists. Where did this event take place?

VS.5b

NEWS

Event: Africans arrive in Jamestown When did this take place?

VS.3e

NEWS

Event: The Governor of Virginia called a meeting of the General Assembly When did this event take place?

VS.3d

NEWS

Event: Settlers arrive in Jamestown. When did this take place?

VS.3a

NEWS

Event: The First Battle of Bull Run. During which war did this event take place?

VS.7b

NEWS

Event: Confederate General Lee surrendered to Union General Grant. When and where did this event take place?

VS.7b

NEWS

Event: Abraham Lincoln elected President. When did this take place?

VS.7a

NEWS

Event: Women arrive in Jamestown. When did this take place?

VS.3e

NEWS

Event: First land battle of the Revolutionary War. Where did this take place?

VS.5c

Directions: Complete each organizer with the name of the region described.

<ul style="list-style-type: none"> ▪ Includes Great Valley of Virginia, and other valleys separated by ridges ▪ Located West of the Blue Ridge Mountains
--

<ul style="list-style-type: none"> ▪ Located in Southwest Virginia ▪ Only a small part of the region is located in Virginia ▪ Part of the regions name means an area of elevated land that is flat on top
--

<ul style="list-style-type: none"> ▪ Old rounded mountains ▪ Part of the Appalachian Mountain system ▪ Source of many rivers ▪ Located between the Piedmont and Valley and Ridge regions
--

<ul style="list-style-type: none"> ▪ Flat Land located near the Atlantic Ocean and Chesapeake Bay ▪ East of the Fall Line

<ul style="list-style-type: none"> ▪ Land at the foot of the hills ▪ Rolling hills ▪ West of the Fall Line

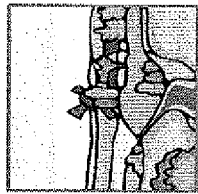
Directions: Each brochure page describes a region. Complete the page by writing the name of the region on the blank.

If you would like to spend a quiet night in a farm house overlooking our large farms then this is the region is for you. After your restful sleep the next morning you can pick your choice of recreation, hiking, bike riding, fishing, and many others. Come visit the

region soon!



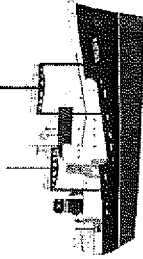
We have farms as far as you can see! Come take a tour of our many, many farms and leave with a free bag of our regions finest apples! Come visit the



region soon!


Take a vacation and some see the newest ships our region has built. You will be amazed when you see how massive these new ships are. While you are here you also might like to tour one of our military bases. Come visit the

region soon!




Only in your region can you see our federal government in action. Also, they are using the latest new technology! If staying inside isn't your thing then you will love our beautiful outdoors, especially visiting our regions horse industry to see what a day in the life of a horse is like. Come visit the

region soon!



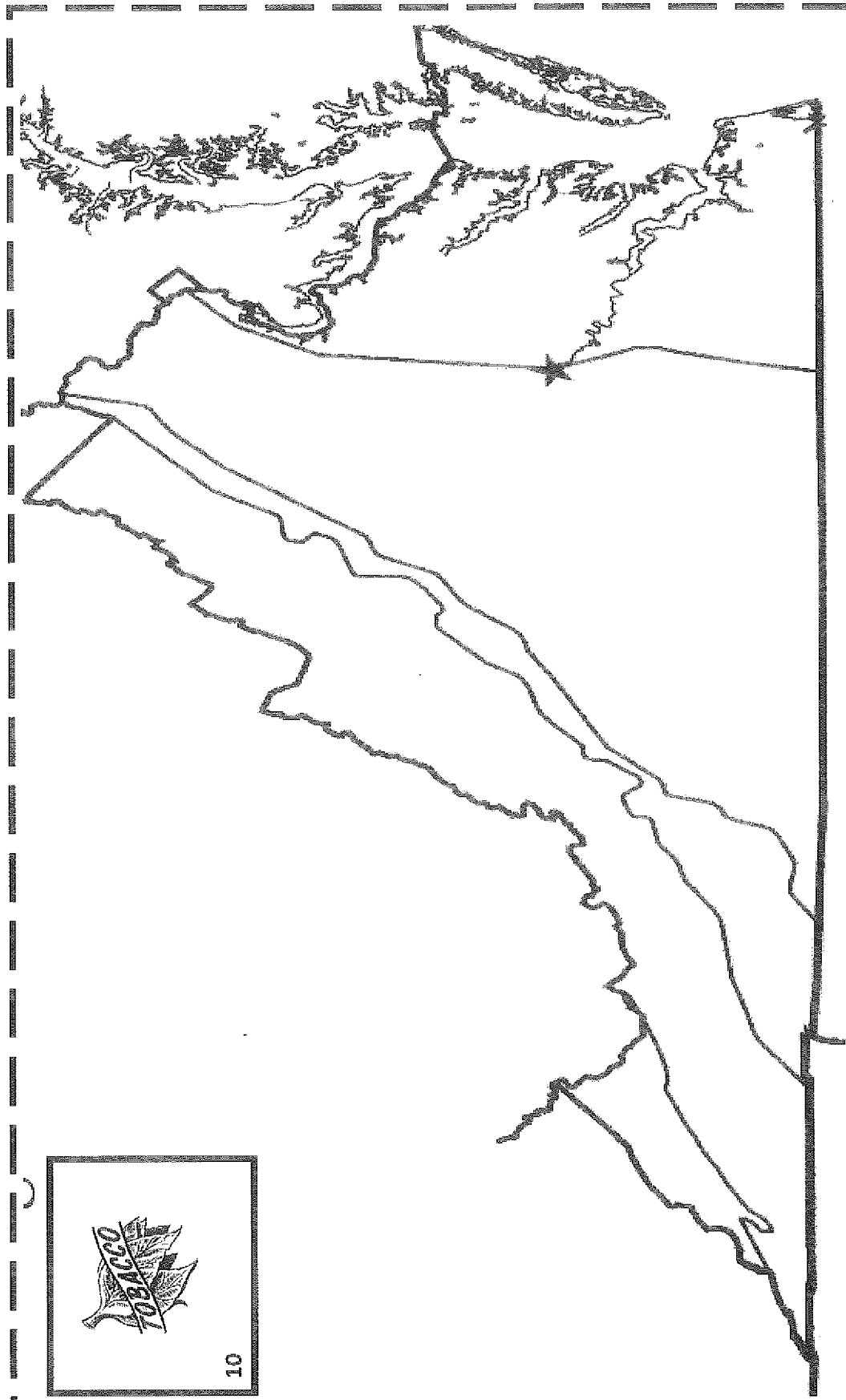


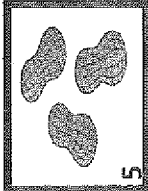

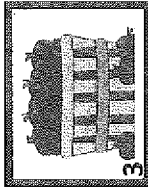

If you have ever wanted to know what a day in the life of a coal miner is like, then you have come to the right place. We have a portion of a coal mine shaft set up for guided tours! You even get to mine a little coal yourself to take home! Come visit the

region soon!



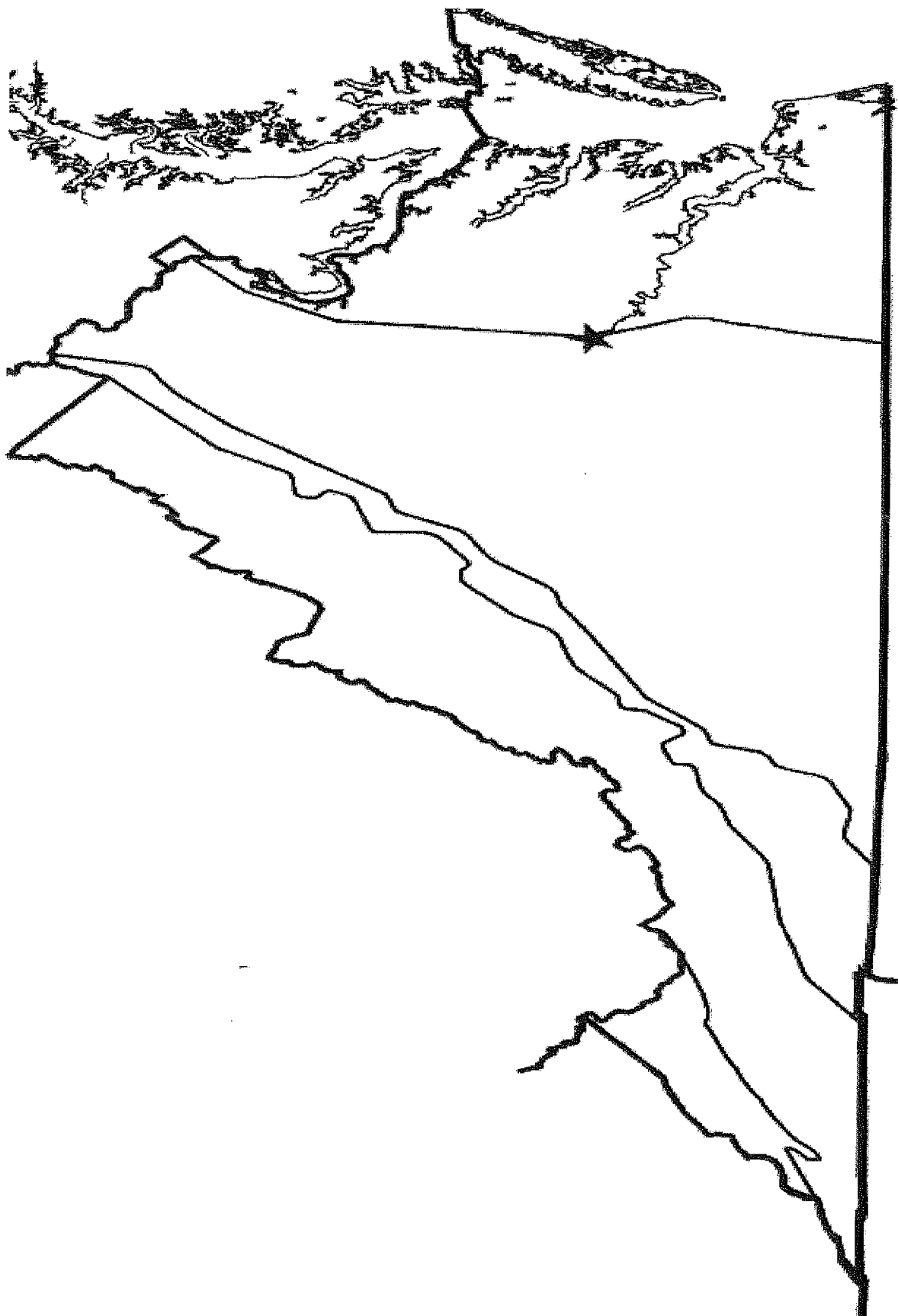
Name: _____

Directions: Each region product has a number. Write the number 1-10 for each product in the correct region. You will use each number only 1 time.



Name: _____

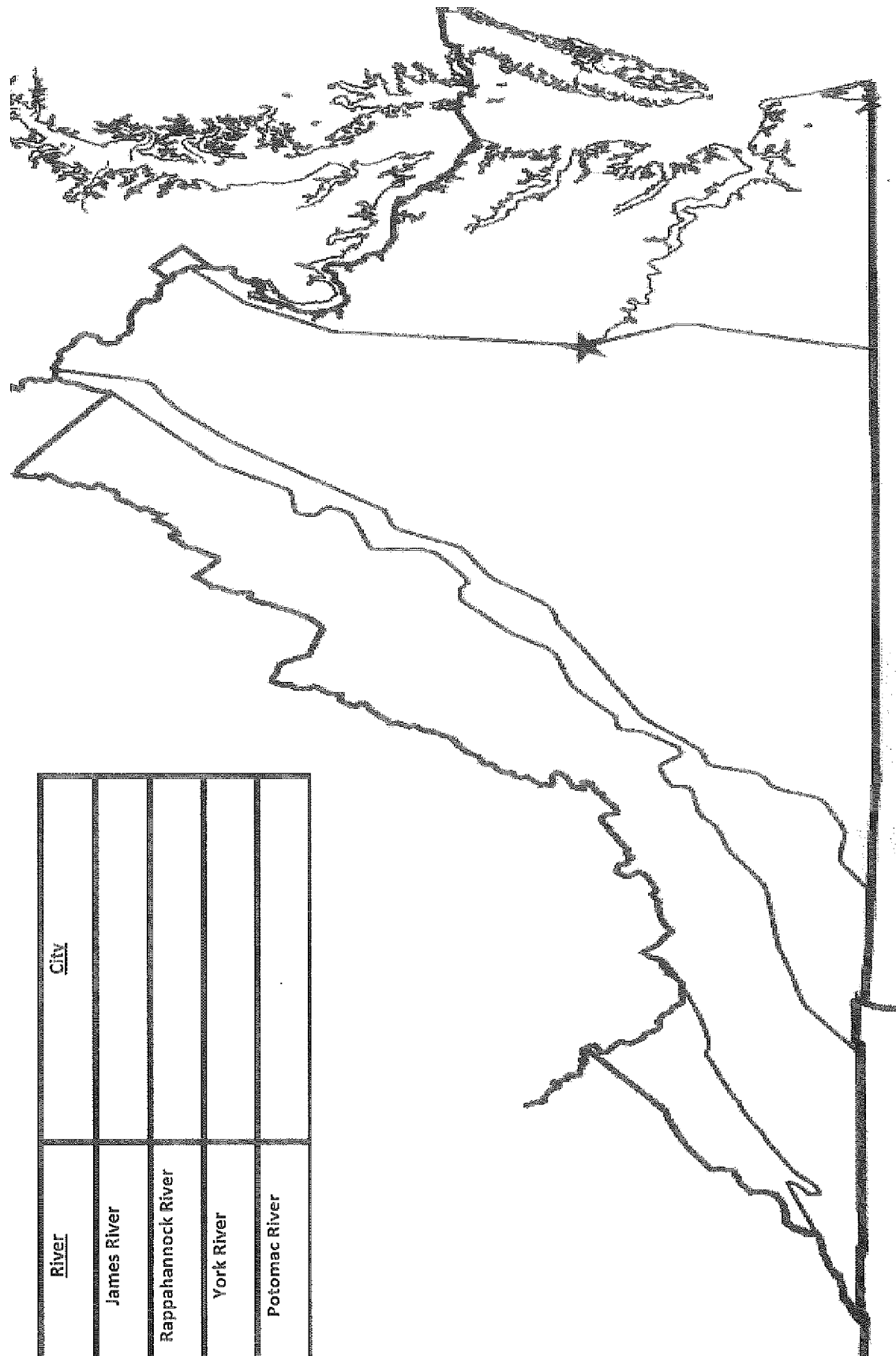
Directions: Label the five regions, the Eastern Shore, Atlantic Ocean, and Chesapeake Bay.



Name: _____

Directions: Label the Fall Line, the region that is a source of many rivers, James River, Rappahannock River, Potomac River, York River, then in the box write the city found along that river.

<u>River</u>	<u>City</u>
James River	
Rappahannock River	
York River	
Potomac River	



Directions: In each box write either Jim Crow or Civil Rights as to which time period the situation is related to.

Laws were passed to
make racial
discrimination illegal

American Indians were
also treated unfairly.

Schools closed to avoid
integration

Signs hanging up above
door ways that read
“White entrance” and
“Colored entrance”

African Americans are
treated unfairly just
because of their race.

There are separate and
unequal facilities for the
races such as restaurants,
schools, water fountains.

Poll taxes

Voting tests

Harry F Byrd

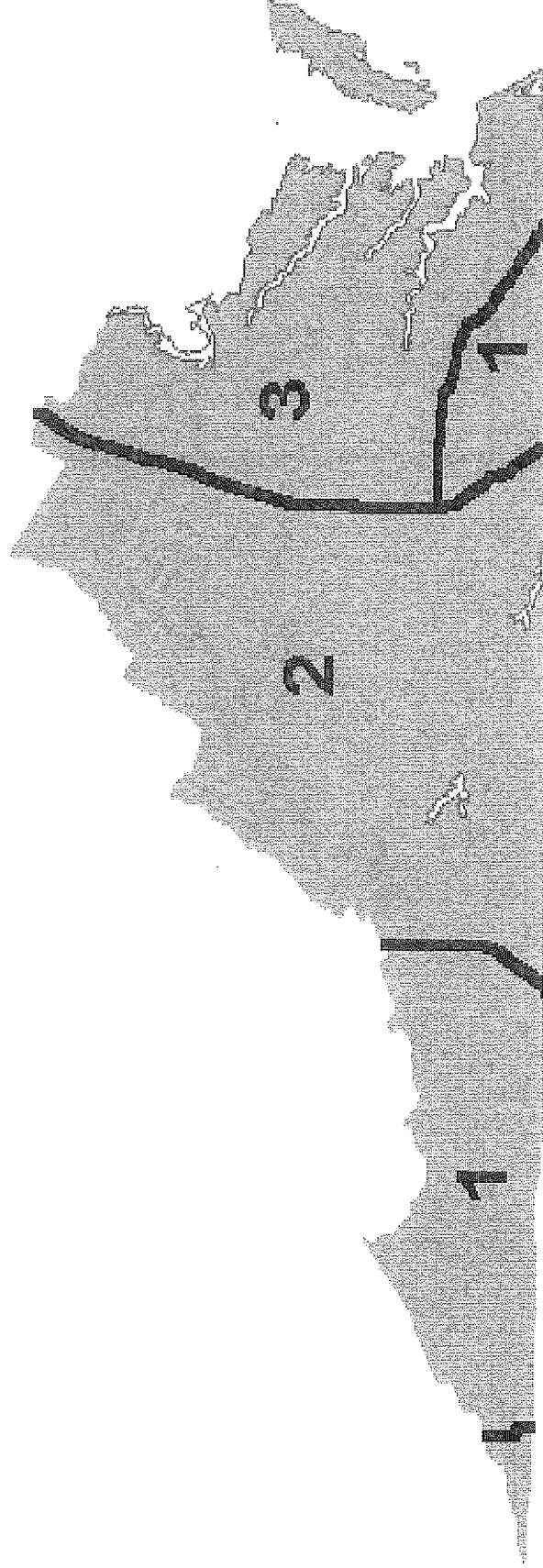
Massive Resistance

*Brown v. Board of
Education*

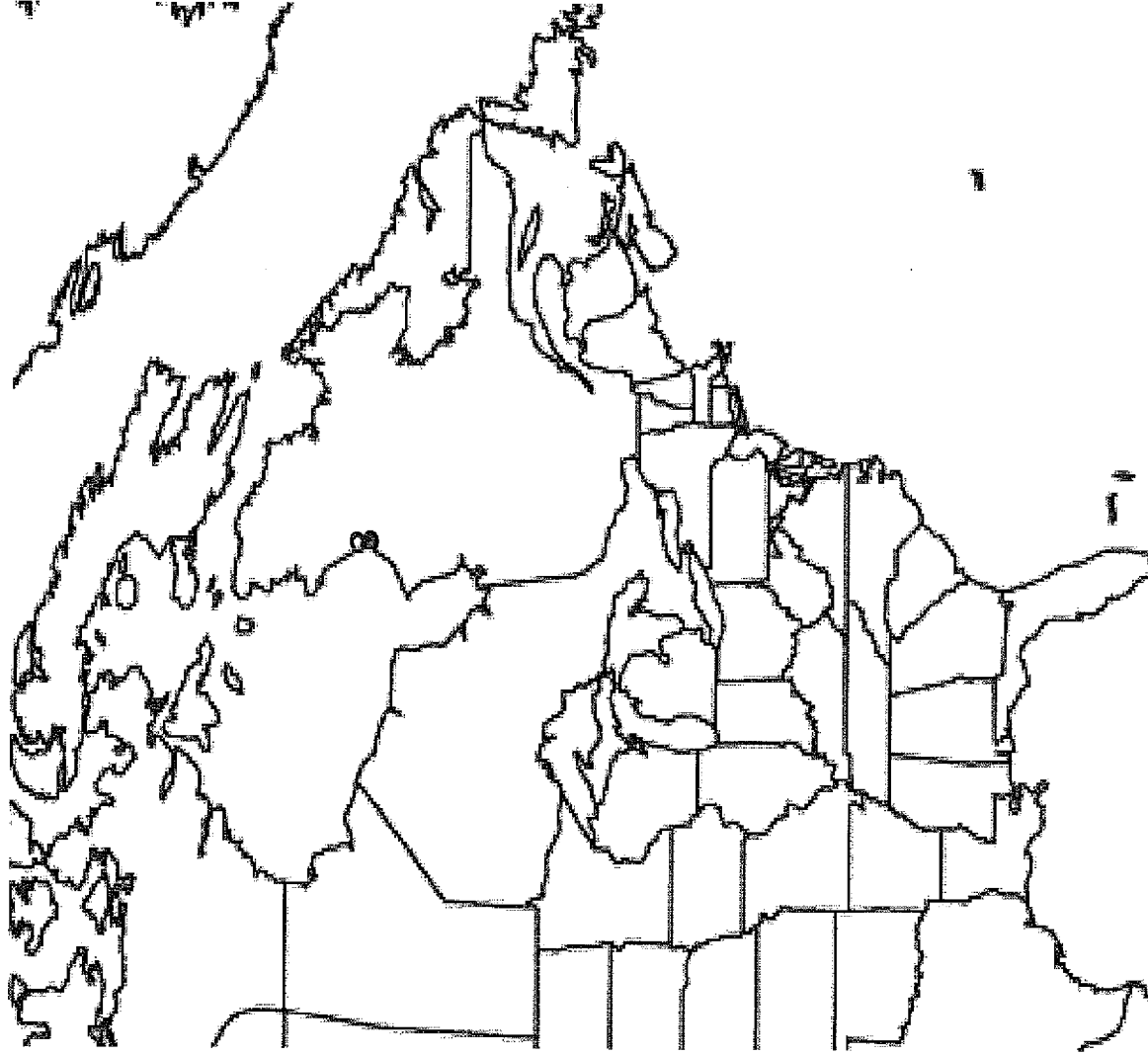
Children of all races go to
the same school

Directions: Fill in the boxes based on the map below.

	<u>Language</u>	<u>Tribe</u>
1		
2		
3		



Directions: Label the continent, Draw an X on Virginia, label the five states that border Virginia.



1. What was the first permanent English settlement in America?

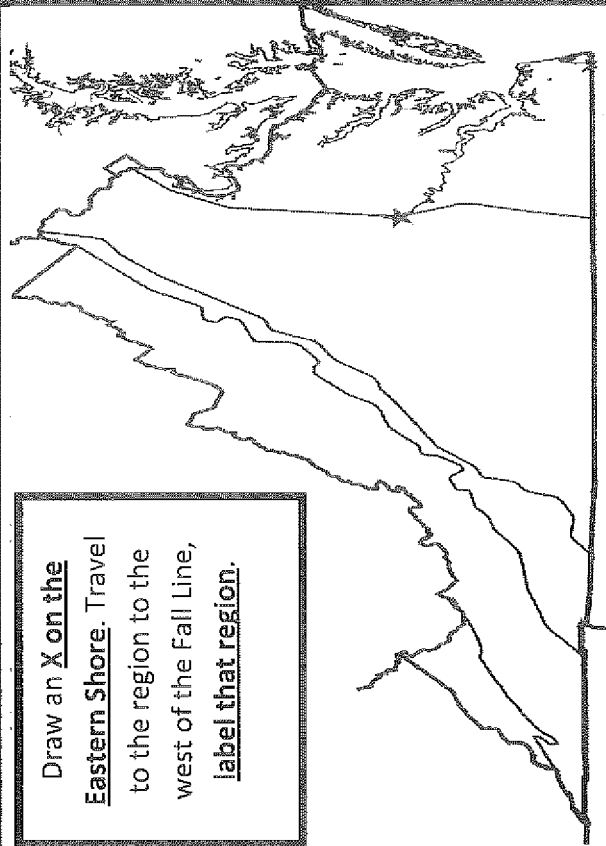
2. When was it settled?

3. Why was it settled?

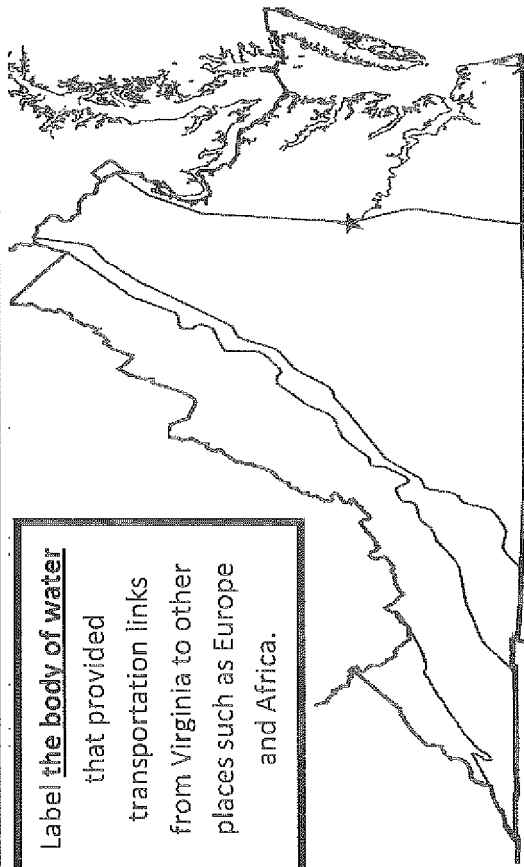
4. Circle and label the ocean closest to Virginia.

Name: _____

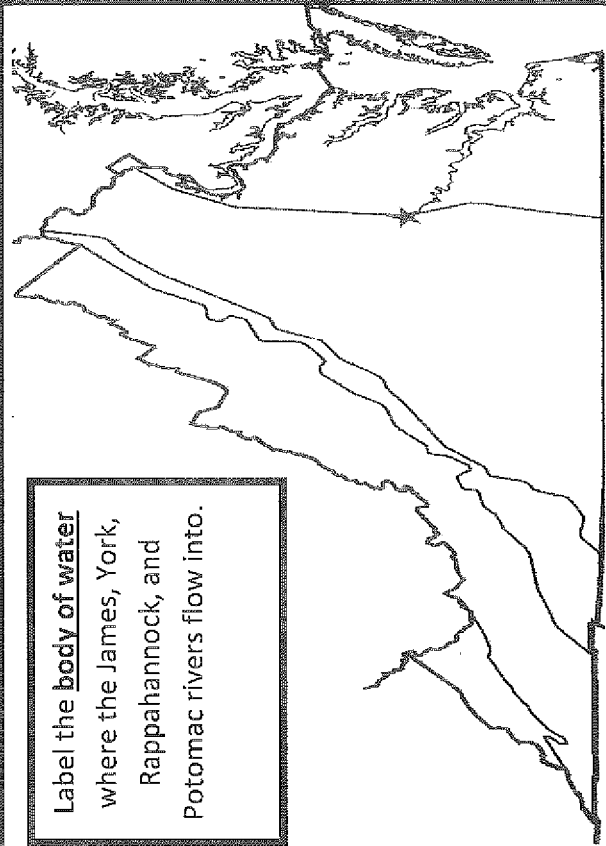
Draw an X on the Eastern Shore. Travel to the region to the west of the Fall Line, label that region.



Label the body of water that provided transportation links from Virginia to other places such as Europe and Africa.



Label the body of water where the James, York, Rappahannock, and Potomac rivers flow into.



Draw an X on the Appalachian Plateau. Leave the Appalachian Plateau, travel east past the Fall Line, label the region you are in now.

